

Name and Index Number: ()	Class:
--	--------



SENG KANG SECONDARY SCHOOL PRELIMINARY EXAMINATION

CHEMISTRY

6092/01

Secondary 4 Express

30 August 2021

Paper 1 Multiple Choice

1 hour

Additional Materials: Multiple Choice Answer Sheet

READ THESE INSTRUCTIONS FIRST

Write your index number and name on all the work you hand in.
You may use a soft pencil for any diagrams, graphs or rough working.
Do not use staples, paper clips, highlighters, glue or correction fluid.

There are **forty** questions in this paper. Answer **all** questions. For each question there are four possible answers **A, B, C** and **D**.

Choose the **one** you consider correct and record your choice in soft pencil on the Multiple Choice Answer Sheet.

Read the instructions on the Answer Sheet very carefully.

Each correct answer will score one mark. A mark will not be deducted for a wrong answer.
Any rough working should be done in this question paper.
The use of an approved scientific calculator is expected, where appropriate.

A copy of the Periodic Table is printed on page 14.

Parent's / Guardian's Signature:

This document consists of **14** printed pages.

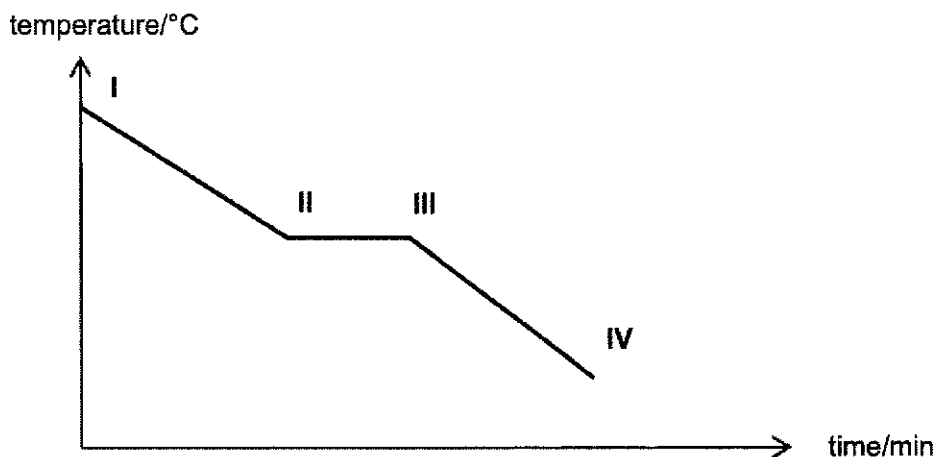
Do not turn over the page until you are told to do so.

PartnerInLearning

[Turn over

2

- 1 A sample of nitrogen dioxide gas is cooled. The temperature is measured every minute and represented in the graph below.



Which row describes the arrangement and movement of particles in the region III to IV?

	arrangement	movement
A	closely packed and orderly	vibrate about fixed positions
B	closely packed and disorderly	moving rapidly
C	closely packed and disorderly	sliding over one another
D	mixture of particles closely packed in orderly and disorderly arrangement	some particles are vibrating about fixed positions while others slide over one another

- 2 The table gives data about four substances.

substance	melting point / °C	boiling point / °C
tannium	50	90
chagon	70	600
karenium	-30	-12
chinium	-15	101

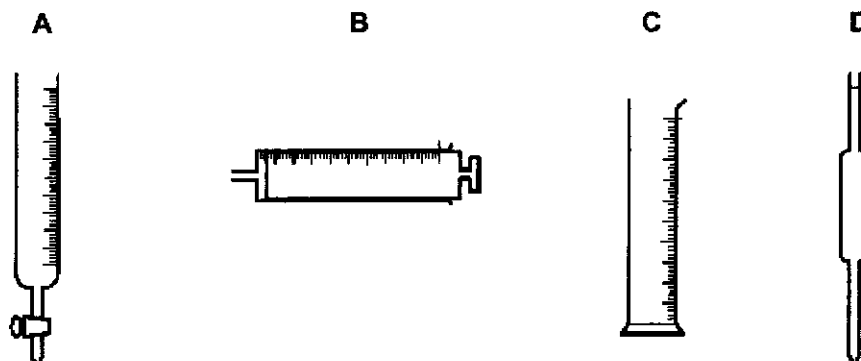
At what temperature would there be exactly two substances in liquid state?

- A -20 °C B 0 °C C 16 °C D 60 °C

Turn over

3

- 3 A to D are pieces of apparatus.



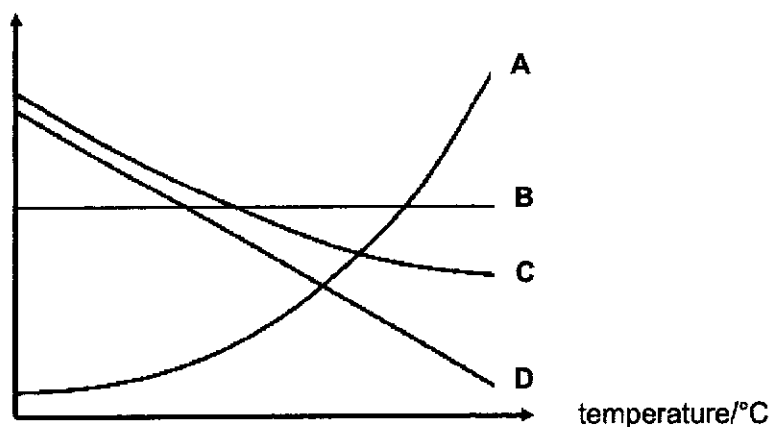
Which row describes the correct apparatus for the measurement made?

	measurement made
A	30.50 cm ³ of acid added to an alkali in a titration
B	1 cm ³ of acid added to calcium carbonate in a rate-determining experiment
C	40 cm ³ of gas evolved in a rate-determining experiment
D	12.0 cm ³ of alkali for use in a titration

- 4 The solubility curves of four different substances A to D in water are shown below.

The solubility of a substance refers to the mass of substance that can dissolve completely in 100 g of water at different temperature.

solubility/g per 100 g of water



Which substance is the **most** suitable to be collected by crystallisation, from cooling its hot saturated aqueous solution?

[Turn over

Partner Learning

- 5 When separating a mixture of sodium carbonate and magnesium oxide, why is it important to stir the mixture thoroughly in water before filtration?
- A to ensure a good separation of the mixture
 - B to ensure that all the sodium carbonate dissolves
 - C to ensure that all the magnesium oxide dissolves
 - D to increase the rate of reaction between the two substances

- 6 When crude oil is fractionally distilled, which compounds leave from the bottom of the fractionating column?
- A the compounds that are the most flammable
 - B the compounds that are the least viscous
 - C the compounds with the highest relative molecular mass
 - D the compounds with the lowest boiling points

- 7 A sample of a white crystalline solid is heated in the absence of oxygen. It melts sharply at 120 °C but on further heating, smoky fumes and a black solid were observed.

What can be concluded about the white crystalline solid?

- A It is a compound that decomposed to form simpler substances.
 - B It is a mixture known as hydrated salt.
 - C It is a pure substance that undergoes combustion to form two products only.
 - D It is an element that decomposed to form simpler substances.
- 8 In March 2011, an earthquake in Japan caused the release of radioactive isotopes from the Fukushima Daiichi nuclear power plant.

One of these radioactive isotopes is $^{131}_{53}\text{I}$, which has been linked to an increased risk of thyroid cancer.

Which statement about $^{131}_{53}\text{I}$ is correct?

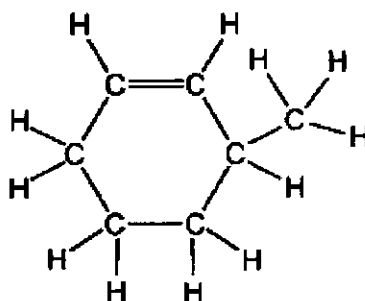
- A This isotope has a nucleon number of 78.
- B The number of electrons in one atom of this isotope is 53.
- C The number of neutrons in one atom of this isotope is 131.
- D $^{131}_{52}\text{Te}$ is an isotope of $^{131}_{53}\text{I}$.

[Turn over

9 Which statement about the F^- , Na^+ and Ne is correct?

- A They all contain the same number of protons.
- B They all contain the same number of electrons.
- C They all contain more electrons than protons.
- D They all contain more neutrons than protons.

10 The diagram shows a molecule of a hydrocarbon.



What is the total number of electrons involved in bonding?

- A 10 B 20 C 30 D 40

11 Which statement explains the electrical conductivity of copper?

- A Free moving electrons and positive ions in copper can carry charge.
- B Free moving electrons in copper can carry charge.
- C Free moving electrons, positive and negative ions in copper can carry charge.
- D Free moving positive ions in copper can carry charge.

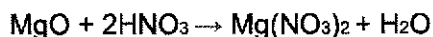
12 Silicon carbide has a similar structure to diamond. Boron nitride has a similar structure to graphite. However, boron nitride does not contain any delocalised electrons. Bronze is an alloy of copper and tin.

Which statement is true?

- A All three substances are covalently bonded.
- B All three substances have high melting point.
- C Bronze and silicon carbide conduct electricity.
- D Silicon carbide can be used as a lubricant, while boron nitride can be used as a drill tip for cutting.

[Turn over

- 13 12 g of impure magnesium oxide was added to excess dilute nitric acid to form magnesium nitrate and water, as shown in the equation below.



Given that 23 g of magnesium nitrate was obtained in the experiment, what is the percentage purity of magnesium oxide?

- A 47.8% B 51.8% C 52.2% D 58.0%
- 14 What is the number of ions in 319.5 g of aluminium nitrate, $\text{Al}(\text{NO}_3)_3$?
[Relative formula mass of $\text{Al}(\text{NO}_3)_3$ is 213]
- A 6.0×10^{23} B 9.0×10^{23} C 1.8×10^{24} D 3.6×10^{24}
- 15 Which method(s) is/are suitable to distinguish 1.00 mol/dm^3 of aqueous hydrochloric acid from 1.00 mol/dm^3 of aqueous ethanoic acid?

I	using a pH meter
II	determining the volume of 1.00 mol/dm^3 of sodium hydroxide solution used to neutralise 25.0 cm^3 of the acids separately
III	measuring the total volume of hydrogen gas formed when excess magnesium is added to the same volume of acids separately

- A I only
B I and II
C I and III
D II and III
- 16 An alloy of copper and zinc is added to an excess of dilute hydrochloric acid.

The resulting mixture is then filtered.

Which row shows the correct observations?

	filtrate	residue
A	blue solution	grey
B	blue solution	none
C	colourless solution	none
D	colourless solution	pink

[Turn over

- 17 Which ions are present in aqueous chromium(III) nitrate?
- A chromium(III) ions and nitrate ions only
 B chromium(III) ions, nitrate ions and hydrogen ions
 C chromium(III) ions, nitrate ions and hydroxide ions
 D chromium(III) ions, nitrate ions, hydrogen ions and hydroxide ions
- 18 Which pair of compounds could be used in the preparation of lead(II) sulfate?
- A lead(II) carbonate and sodium sulfate
 B lead(II) chloride and ammonium sulfate
 C lead(II) chloride and barium sulfate
 D lead(II) nitrate and sodium sulfate
- 19 Which mixture of gases would **not** change the colour of a damp blue litmus paper when they are tested separately?
- A carbon dioxide and ammonia
 B chlorine and nitrogen
 C hydrogen and ammonia
 D nitrogen and hydrogen chloride
- 20 An aqueous solution of a compound, T, undergoes the following the reactions.

reaction	result
add aqueous sodium hydroxide	green precipitate
add acidified aqueous silver nitrate	yellow precipitate

What is T?

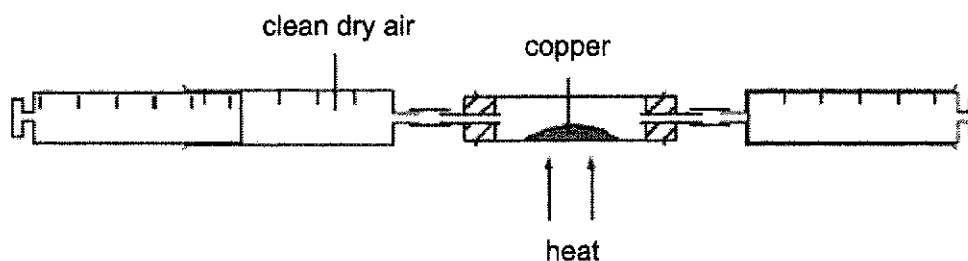
- A iron(II) bromide
 B iron(III) chloride
 C iron(II) iodide
 D iron(III) nitrate
- 21 Which pair of gases are involved in the formation of acid rain?
- A CO and CO₂
 B CH₄ and NO₂
 C NO and CO₂
 D SO₂ and NO₂

[Turn over

22 Which pairs of substances are used to remove sulfur dioxide from flue gases?

- A CaCO_3 and CaSO C CaSO_3 and CaO
 B CaCO_3 and CaO D CaSO_3 and CaSO_4

23 A sample of clean, dry air is passed over hot copper until all the oxygen in the air reacts with the copper.



The volume of air decreases by 84 cm^3 .

What is the initial volume of the sample of air?

- A 60 cm^3 B 100 cm^3 C 150 cm^3 D 400 cm^3

24 When potassium manganate(VII) is added slowly to a sample of iron(II) sulfate solution, it turns from purple to colourless. The iron(II) sulfate solution turns from green to light brown.

Which of the following can be concluded from the observation?

	role of potassium manganate(VII)	reaction that iron(II) sulfate has undergone
A	oxidising agent	oxidation
B	oxidising agent	reduction
C	reducing agent	oxidation
D	reducing agent	reduction

25 Which statement describes the changes in the elements from left to right across a period in the Periodic Table?

- A The ability to conduct electricity decreases.
 B The elements change from non-metals to metals.
 C The number of electrons in an atom decreases.
 D The number of neutrons in an atom decreases.

[Turn over

- 26 Four different metals, zinc, silver, magnesium and copper powders were added separately in excess to yellow iron(III) sulfate solution in four beakers.

How many beaker(s) of solution will remain yellow after a few days?

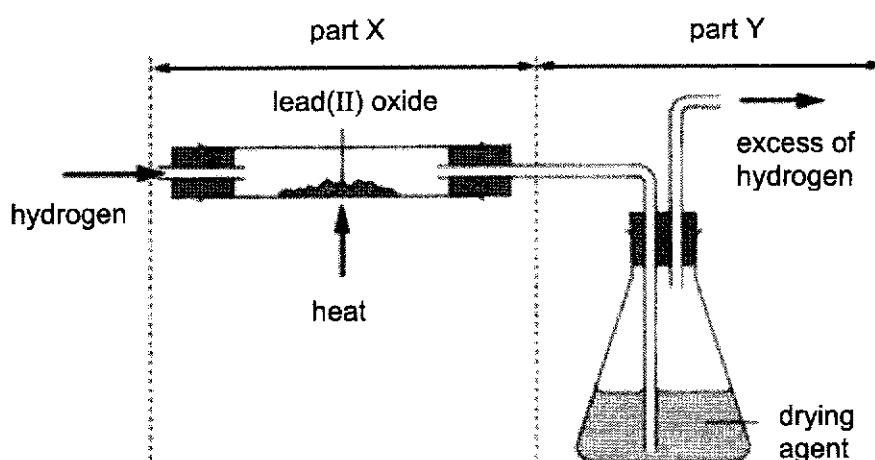
- A 1 B 2 C 3 D 4

- 27 A newly discovered alkali metal, Q, has an atomic number greater than 37.

Which property is typical of Q?

- A Q floats on water.
 B Q has a higher melting point than sodium.
 C Q reacts with water more vigorously than potassium with water.
 D Q reacts with chlorine gas to form a yellow crystalline solid.

- 28 Lead(II) oxide is reduced in the experimental set-up below.



How do the masses of part X and Y of the apparatus change at the end of the reaction?

	part X	part Y
A	increase	increase
B	increase	decrease
C	decrease	increase
D	decrease	decrease

[Turn over

- 29 One mole of solid carbonates of copper, calcium, lead and magnesium undergo thermal decomposition respectively.

Which metal carbonate will release the greatest volume of carbon dioxide after one minute at room condition?

- A calcium carbonate
- B copper(II) carbonate
- C lead(II) carbonate
- D magnesium carbonate

- 30 Which statement about the extraction of iron in a blast furnace is correct?

- A Haematite, containing mainly iron(II) oxide, is reduced.
- B Limestone is used as a catalyst.
- C Slag is formed due to a reaction between an acidic oxide and a basic oxide.
- D The main impurity in the iron formed is slag.

- 31 Which product is formed at the anode when molten aluminum oxide is electrolysed?

- A aluminium ions
- B aluminum atom
- C oxide ions
- D oxygen gas

- 32 A student sets up three chemical cells, each containing two of the metals, X, Y and Z, immersed in an electrolyte.

The table below shows the voltage and the positive terminal of each chemical cell.

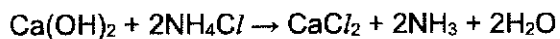
chemical cell	metals used	voltage/V	positive terminal
1	Z and Y	+1.60	Y
2	X and Y	+1.10	X
3	X and Z	+2.70	X

What is the correct order of reactivity for these three metals?

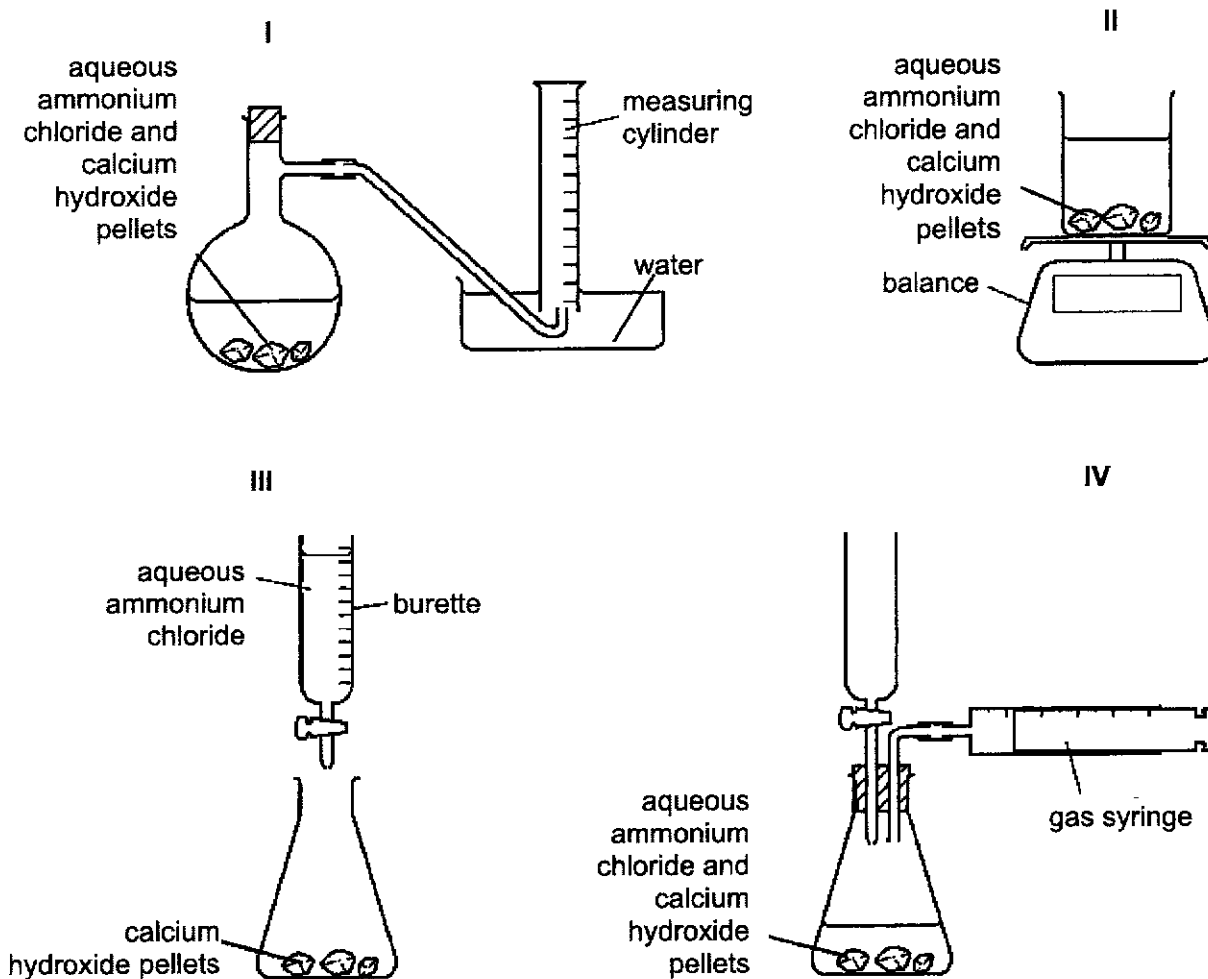
	most reactive	→	least reactive
A	Y	X	Z
B	Z	Y	X
C	Y	Z	X
D	X	Z	Y

[Turn over

- 33 A student wants to carry out an experiment to investigate the speed of the reaction between aqueous ammonium chloride and calcium hydroxide pellets.



Which diagram shows apparatus that is suitable for this experiment?



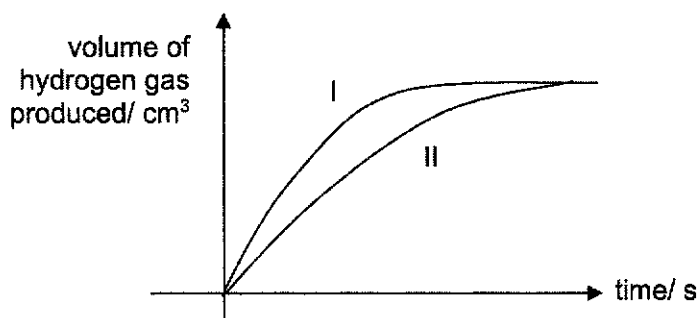
- A I and IV
 B II and IV
 C I, II and IV
 D I, II, III and IV
- 34 Ammonia is produced by the Haber process.

Which statement is **not** correct?

- A A catalyst of iron is used.
 B Each hydrogen molecule reacts with three nitrogen molecules to form two molecules of ammonia.
 C Hydrogen for the process can be obtained by cracking of large hydrocarbons.
 D The reaction is reversible.

[Turn over

- 35 In the graph, curve I was obtained when 1 g of granulated zinc was reacted with an excess of 1 mol/dm^3 hydrochloric acid at 50°C .



- Which change would produce curve II?
- A lower the concentration of hydrochloric acid to 0.5 mol/dm^3
 - B increase the temperature
 - C reduce the pressure of the reacting mixture
 - D use 1 g of zinc powder
- 36 Which property shows an increase in the alkane series from butane \rightarrow propane \rightarrow ethane \rightarrow methane?
- A boiling point
 - B flammability
 - C melting point
 - D viscosity
- 37 One mole of a hydrocarbon Q reacted completely with 1 mole of hydrogen gas in the presence of a heated catalyst.
- What could be the formula of Q?
- A C_2H_6
 - B C_3H_8
 - C C_5H_{10}
 - D C_7H_{16}

- 38 Ethanol can be manufactured from ethene or from glucose. The table gives statements about the processes involved.

In which row are **both** statements **incorrect**?

	process using ethene	process using glucose
A	conversion to ethanol needs temperature greater than 100 °C	conversion to ethanol also produces carbon dioxide
B	conversion to ethanol uses yeast as catalyst	conversion to ethanol is carried out at 100 °C
C	ethene is obtained by cracking	glucose is obtained from fruits
D	the conversion reaction is carried out with the reagent as gases	the conversion reaction is carried out in aqueous solution

- 39 Dimethylamine dissolves in water to give an alkaline solution.

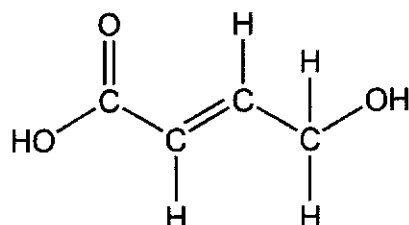
A few drops of Universal Indicator are added to an aqueous solution of dimethylamine.

Which row shows the pH of the solution and the colour of the solution after the indicator has been added?

	pH	colour of solution
A	greater than 7	blue
B	greater than 7	orange
C	less than 7	blue
D	less than 7	orange

- 40 4-hydroxy-but-2-enoic acid is a drug used in scientific research.

The structure of 4-hydroxy-but-2-enoic acid ($C_4H_6O_3$) is shown below.



Which statement is **not** likely to be true for 4-hydroxy-but-2-enoic acid?

- A It can undergo addition polymerisation.
- B It reacts with potassium manganate(VII) .
- C It reacts with calcium carbonate to produce carbon dioxide gas.
- D It can polymerise to produce a polyamide without the addition of other reagent.

END OF PAPER

[Turn over

The Periodic Table of Elements

Group											
I	II	Key									
		proton (atomic) number atomic symbol name relative atomic mass									
		1 H hydrogen 1									
		III IV V VI VII 0									
3 Li lithium 7	4 Be beryllium 9										
11 Na sodium 23	12 Mg magnesium 24	5 B boron 11	6 C carbon 12	7 N nitrogen 14	8 O oxygen 16	9 F fluorine 19	10 Ne neon 20				
19 K potassium 39	20 Ca calcium 40	13 Al aluminium 27	14 Si silicon 28	15 P phosphorus 31	16 S sulfur 32	17 Cl chlorine 35.5	18 Ar argon 40				
37 Rb rubidium 85	38 Sr strontium 88	31 Ga gallium 70	32 Ge germanium 73	33 As arsenic 75	34 Se selenium 79	35 Br bromine 80	36 Kr krypton 84				
55 Cs caesium 133	56 Ba barium 137	49 In indium 115	50 Sn tin 119	51 Sb antimony 122	52 Te tellurium 128	53 I iodine 127	54 Xe xenon 131				
87 Fr francium	88 Ra radium	81 Tl thallium 204	82 Pb lead 207	83 Bi bismuth 209	84 Po polonium	85 At astatine	86 Rn radon				
		30 Zn zinc 65		33 As arsenic 75	34 Se selenium 79	35 Br bromine 80	36 Kr krypton 84				
		29 Cu copper 64		33 As arsenic 75	34 Se selenium 79	35 Br bromine 80	36 Kr krypton 84				
		28 Ni nickel 59		33 As arsenic 75	34 Se selenium 79	35 Br bromine 80	36 Kr krypton 84				
		27 Co cobalt 59		33 As arsenic 75	34 Se selenium 79	35 Br bromine 80	36 Kr krypton 84				
		26 Fe iron 56		33 As arsenic 75	34 Se selenium 79	35 Br bromine 80	36 Kr krypton 84				
		25 Mn manganese 55		33 As arsenic 75	34 Se selenium 79	35 Br bromine 80	36 Kr krypton 84				
		24 Cr chromium 52		33 As arsenic 75	34 Se selenium 79	35 Br bromine 80	36 Kr krypton 84				
		23 V vanadium 51		33 As arsenic 75	34 Se selenium 79	35 Br bromine 80	36 Kr krypton 84				
		22 Ti titanium 48		33 As arsenic 75	34 Se selenium 79	35 Br bromine 80	36 Kr krypton 84				
		21 Sc scandium 45		33 As arsenic 75	34 Se selenium 79	35 Br bromine 80	36 Kr krypton 84				
		20 Ca calcium 40		33 As arsenic 75	34 Se selenium 79	35 Br bromine 80	36 Kr krypton 84				
		19 K potassium 39		33 As arsenic 75	34 Se selenium 79	35 Br bromine 80	36 Kr krypton 84				
		18 Ar argon 40		33 As arsenic 75	34 Se selenium 79	35 Br bromine 80	36 Kr krypton 84				
		17 Cl chlorine 35.5		33 As arsenic 75	34 Se selenium 79	35 Br bromine 80	36 Kr krypton 84				
		16 S sulfur 32		33 As arsenic 75	34 Se selenium 79	35 Br bromine 80	36 Kr krypton 84				
		15 P phosphorus 31		33 As arsenic 75	34 Se selenium 79	35 Br bromine 80	36 Kr krypton 84				
		14 Si silicon 28		33 As arsenic 75	34 Se selenium 79	35 Br bromine 80	36 Kr krypton 84				
		13 Al aluminium 27		33 As arsenic 75	34 Se selenium 79	35 Br bromine 80	36 Kr krypton 84				
		12 Mg magnesium 24		33 As arsenic 75	34 Se selenium 79	35 Br bromine 80	36 Kr krypton 84				
		11 Na sodium 23		33 As arsenic 75	34 Se selenium 79	35 Br bromine 80	36 Kr krypton 84				
		10 Ne neon 20		33 As arsenic 75	34 Se selenium 79	35 Br bromine 80	36 Kr krypton 84				
		9 F fluorine 19		33 As arsenic 75	34 Se selenium 79	35 Br bromine 80	36 Kr krypton 84				
		8 O oxygen 16		33 As arsenic 75	34 Se selenium 79	35 Br bromine 80	36 Kr krypton 84				
		7 N nitrogen 14		33 As arsenic 75	34 Se selenium 79	35 Br bromine 80	36 Kr krypton 84				
		6 C carbon 12		33 As arsenic 75	34 Se selenium 79	35 Br bromine 80	36 Kr krypton 84				
		5 B boron 11		33 As arsenic 75	34 Se selenium 79	35 Br bromine 80	36 Kr krypton 84				
		4 Be beryllium 9		33 As arsenic 75	34 Se selenium 79	35 Br bromine 80	36 Kr krypton 84				
		3 Li lithium 7		33 As arsenic 75	34 Se selenium 79	35 Br bromine 80	36 Kr krypton 84				
		2 He helium 4		33 As arsenic 75	34 Se selenium 79	35 Br bromine 80	36 Kr krypton 84				
		1 H hydrogen 1		33 As arsenic 75	34 Se selenium 79	35 Br bromine 80	36 Kr krypton 84				
		0 - - -		33 As arsenic 75	34 Se selenium 79	35 Br bromine 80	36 Kr krypton 84				

lanthanoids														
57 La lanthanum 139	58 Ce cerium 140	59 Pr praseodymium 141	60 Nd neodymium 144	61 Pm promethium -	62 Sm samarium 150	63 Eu europium 152	64 Gd gadolinium 157	65 Tb terbium 159	66 Dy dysprosium 163	67 Ho holmium 165	68 Er erbium 167	69 Tm thulium 169	70 Yb ytterbium 173	71 Lu lutetium 175
actinoids														
88 Ac actinium -	89 Th thorium 232	90 Pa protactinium 231	91 U uranium 238	92 Np neptunium -	93 Pu plutonium -	94 Am americium -	95 Cm curium -	96 Bk berkelium -	97 Cf californium -	98 Es einsteinium -	99 Fm fermium -	100 Md mendelevium -	101 No nobelium -	102 Lr lawrencium -

Volume of one mole of any gas is 24 dm^3 at room temperature and pressure (r.t.p.).

Name and Index Number: ()	Class:
---	--------



SENG KANG SECONDARY SCHOOL PRELIMINARY EXAMINATION

CHEMISTRY

6092/02

Secondary 4 Express

31 August 2021

Paper 2 Theory

1 hour 45 minutes

Candidates answer on the Question Paper.

No Additional Materials are required.

READ THESE INSTRUCTIONS FIRST

Write your index number and name on all the work you hand in.

Write in dark blue or black pen on both sides of the paper.

You may use a soft pencil for any diagrams, graphs or rough working.

Do not use staples, paper clips, highlighters, glue or correction fluid.

Section A

Answer **all** questions in the spaces provided.

Section B

Answer all **three** questions, the last question is in the form either/or.

At the end of the examination, fasten all your work securely together.

The number of marks is given in brackets [] at the end of each question or part question.

A copy of the Periodic Table is printed on page 22.

The use of an approved scientific calculator is expected, where appropriate.

For Examiner's use	
Section A	/ 50
1	/ 8
2	/ 3
3	/ 3
4	/ 7
5	/ 14
6	/ 9
7	/ 6
Section B	/ 30
8	/ 13
9	/ 7
Either 10	/ 10
Or 10	/ 10
Total	/ 80
Total %	/ 100

Parent's / Guardian's Signature:

This document consists of **21** printed pages and **1** blank page.

Do not turn over the page until you are told to do so.

[Turn over

2

Section A

Answer **all** the questions in this section in the spaces provided.

- 1 (a) Use the list of substances to answer the questions.

aluminium chloride

ammonium chloride

copper(II) chloride

hydrogen chloride

iron(III) chloride

magnesium chloride

silver chloride

Each substance may be used once, more than once or not at all.

- (i) Which **two** substances contain a cation with a 3+ charge?

..... [1]

- (ii) Which substance is insoluble in water?

..... [1]

- (iii) Which substance turns Universal Indicator red when dissolved in water?

..... [1]

- (iv) Which substance is a coloured solid at room temperature and pressure?

..... [1]

- (v) Which substance contains three different elements chemically combined together?

..... [1]

[Turn over

3

- (b) Describe how you would carry out a chemical test to differentiate aluminium chloride from zinc chloride. Include your expected observations.

.....


.....

..... [3]

[Total: 8]

- 2 (a) Bath bombs are a mixture of dry ingredients that are packed tightly into various shapes and sizes. They can be used in bathtubs and are commonly infused with a blend of essential oils.

The label shows some common ingredients found in many different bath bombs.



ingredients: sodium hydrogencarbonate,
citric acid, titanium dioxide,
tin oxide, benzyl alcohol

Suggest why bath bomb will produce effervescence when dropped into water.

.....

.....

..... [2]

- (b) Describe how you can identify the gas liberated.

test:


observation: [1]

[Total: 3]

[Turn over

- 3 (a) Leaves of plants contain a number of different coloured pigments.

Three students want to extract and analyse some of these coloured pigments. The leaves are chopped up and grinded using a mortar and pestle and then mixed with ethanol.



The pigments are separated using paper chromatography.

- (i) Fig. 3.1 shows the students' experimental set-ups. Two students made mistakes in their experimental set-ups.

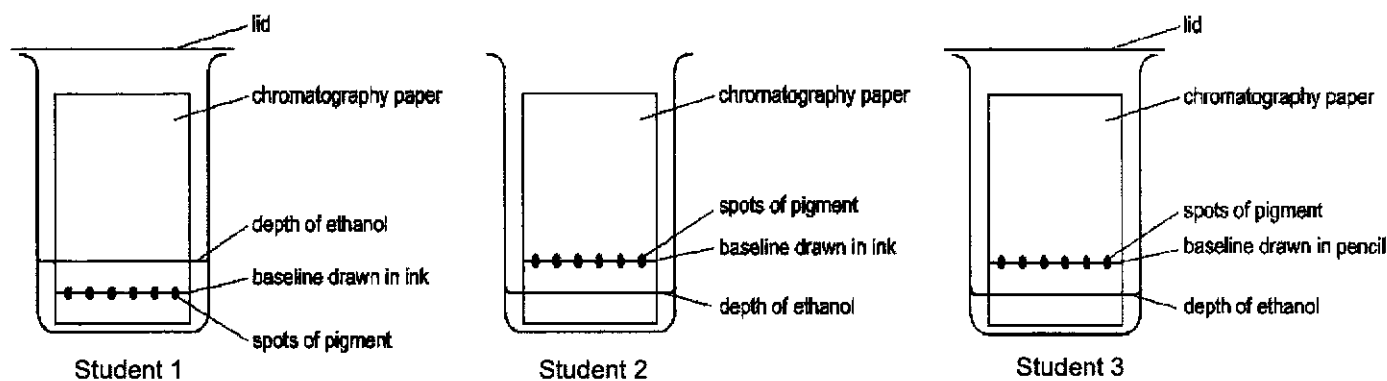


Fig. 3.1

State **two** mistakes made by **different students** shown in Fig. 3.1. Include in your answer the student who made the respective mistake.

mistake 1:

.....

mistake 2:

.....

[2]

- (b) Three different coloured pigments were observed on the chromatogram and analysed after being separated using paper chromatography.

Complete Table 3.2 to show the distance travelled by the other two pigments.

Table 3.2

coloured pigments	R_f value	distance travelled (cm)
light blue	0.2	
dark pink	0.4	1.00
dark blue	0.6	

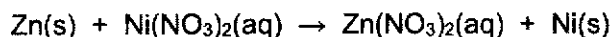
[1]

[Total: 3]

[Turn over]

- 4 (a) The reaction of zinc with nickel(II) nitrate solution is a redox reaction.

The equation for the reaction is shown.



- (i) Use oxidation state to explain why this is a redox reaction.

.....

.....

.....

..... [2]

- (ii) Write an ionic equation, with state symbols, for this reaction.

..... [1]

- (b) (i) Draw a labelled diagram to show how a rectangular block made of nickel is electroplated with silver. Your diagram should include labels and identify the anode, cathode and electrolyte.

[2]

- (ii) Write the half equations for the reaction that happens at each electrode. Include state symbols.

anode:

cathode: [2]

[Total: 7]

[Turn over]

- 5 Down the Group, the hydroxides of Group II vary in their solubilities in water as shown in Table 5.1.

Table 5.1

Group II hydroxide	solubility in mol/dm ³
Mg(OH) ₂	0.000160
Ca(OH) ₂	0.0250
Ba(OH) ₂	0.410

- (a) A student made the following statement:

The pH of aqueous solutions of Group II hydroxides increases down the Group.

Explain using the information in Table 5.1, why the statement is true.

.....
 [1]

- (b) Suggest a value for the solubility of strontium hydroxide, Sr(OH)₂.

..... [1]

- (c) Fig. 5.2 shows a list of period 3 oxides.

Na₂O MgO Al₂O₃ SiO₂ P₂O₅ SO₂ Cl₂O

Fig. 5.2

- (i) Identify the oxides in Fig. 5.2 that can react with Ba(OH)₂.
Explain your answer.

.....
 [2]

- (ii) Explain, in terms of structure and bonding, why MgO exists as a solid at room temperature and pressure.

.....

 [2]

[Turn over

- (iii) Draw a 'dot-and-cross' diagram to show the bonding in MgO .
Show outer electrons only.

[2]

- (iv) Explain why SiO_2 has a higher melting point than SO_2 .

.....

.....

.....

.....

[2]

- (v) An oxide of phosphorus contains 43.7% by mass of phosphorous.

Show that the empirical formula for this oxide is P_2O_5 .

[Ar: O, 16; P, 31]

[2]

- (d) Chlorine exists as two isotopes, chlorine-35 and chlorine-37.

In a sample of 100 chlorine atoms, there are 76 atoms of chlorine-35 and 24 atoms of chlorine-37.

Find the relative atomic mass of this chlorine sample.

[2]

[Total: 14]

[Turn over]

- 6 Fractional distillation and cracking are important processes in the conversion of petroleum into useful substances.

Fractional distillation separates petroleum into fractions such as paraffin and naphtha.

- (a) State one use for the paraffin fraction.

..... [1]

- (b) The naphtha fraction is used as chemical feedstock.

One of the hydrocarbons in naphtha is a straight chain alkane with the molecular formula of $C_{10}H_{22}$.

When one molecule of $C_{10}H_{22}$ is cracked, three possible products are propane, butene and unsaturated compound, Y.

- (i) Identify Y.

..... [1]

- (ii) Butene is an alkene.

Draw the full structural formulae of **two** isomers of butene.

[2]

- (iii) A student has a sample of propane and a sample of butene.

State a reagent and describe the observations which could be used to distinguish between the samples.

reagent	observation for propane	observation for butene

[2]

[Turn over

- (c) Octane, C_8H_{18} , is a main component present in motorcar fuel. When burnt in excess oxygen, carbon dioxide and water are produced.

The enthalpy change for the burning of octane is -5500 kJ/mol .

- (i) Write an equation for the complete combustion of octane, C_8H_{18} .

..... [1]

- (ii) Explain in terms of bond making and bond breaking, why the enthalpy change for the burning of 1 mole of octane, has a negative sign.

.....

.....

..... [2]

[Total: 9]

[Turn over

- 7 Esters are organic compounds that have a sweet, fruity aroma and are widely used in food industry and perfumery,

Table 7.1 shows the name, structural formula, relative molecular mass and boiling point of four esters.

Table 7.1

name	structural formula	relative molecular mass	boiling point/ $^{\circ}\text{C}$
methyl ethanoate	$\text{CH}_3\text{COOCH}_3$	74	57
ethyl ethanoate	$\text{CH}_3\text{COOCH}_2\text{CH}_3$	88	77
propyl ethanoate	$\text{CH}_3\text{COOCH}_2\text{CH}_2\text{CH}_3$	102	102
butyl ethanoate	$\text{CH}_3\text{COOCH}_2\text{CH}_2\text{CH}_2\text{CH}_3$	116	126

- (a) Use the information in Table 7.1 to give **two** pieces of evidence that suggest that the esters are in a homologous series.

.....

.....

..... [2]

- (b) Which ester has the **greatest** rate of diffusion at room temperature and pressure? Use the information in Table 7.1 to explain your reasoning.

.....

..... [2]

- (c) Complete the table to show the full structural formulae and the names of the carboxylic acid and alcohol used to make propyl ethanoate.

carboxylic acid	alcohol
name:	name:

[2]

[Total: 6]

[Turn over

BLANK PAGE

[Turn over

Section B

Answer all **three** questions in this section.

The last question is in the form of an either/or and only one of the alternatives should be attempted.

8 Properties of Hydrogen Halides

The hydrogen halides make up one of the most important classes of inorganic compounds containing Group VII elements. High purity hydrogen halides are formed when hydrogen and halogens are chemically combined.

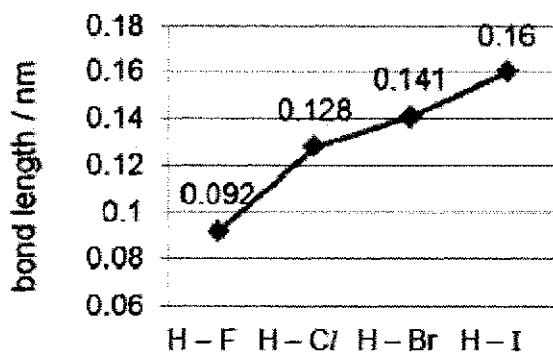
Table 8.1 shows the observations when hydrogen combined directly with different halogens.

Table 8.1

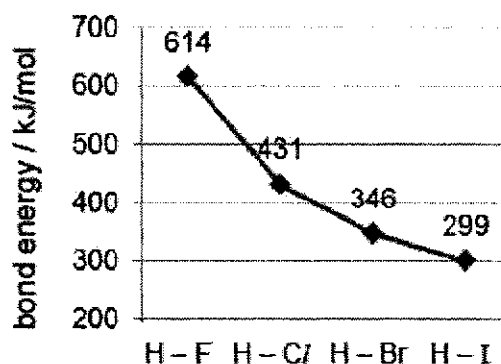
reaction	observation
$\text{H}_2 + \text{F}_2 \rightarrow 2\text{HF}$	Reacts explosively even in the dark at -200°C
$\text{H}_2 + \text{Cl}_2 \rightarrow 2\text{HCl}$	Reacts explosively in sunlight but takes place slowly in the dark
$\text{H}_2 + \text{Br}_2 \rightarrow 2\text{HBr}$	
$\text{H}_2 + \text{I}_2 \rightleftharpoons 2\text{HI}$	Reacts very slowly in sunlight even on heating with platinum

Graphs 1 and 2 show how bond length and bond energy vary for the different hydrogen halides.

Bond length refers to the average distance between the nuclei of two bonded atoms in a molecule. Bond energy is a measure of the bond strength in a chemical bond. It is the energy required to break one mole of molecules into their individual atoms.



Graph 1



Graph 2

[Turn over

Strength of Acids

The acid dissociation constant, K_a , is a quantitative measure of the strength of an acid in solution. The larger the K_a value, the more dissociation of the acid molecules in solution and thus the stronger the acid.

Hydrogen halides are extremely soluble in water, forming acidic solutions with its respective K_a , as shown in Table 8.2.

Table 8.2

	acidic solution	chemical formula	acid dissociation constant, K_a
hydrogen halides	hydrofluoric acid	HF	6.8×10^{-4}
	hydrochloric acid	HCl	1.0×10^6
	hydrobromic acid	HBr	1.0×10^9
	hydroiodic acid	HI	3.0×10^9

- (a) (i) With reference to Table 8.1, predict the observation for the reaction of bromine with hydrogen gas.

.....

..... [1]

- (ii) Suggest the function of platinum in the reaction of iodine with hydrogen gas.

..... [1]

- (b) Describe the relationship between the bond length and bond energy of the hydrogen halides.

.....

..... [2]

[Turn over

- (c) (i) With reference to Table 8.2, determine the strongest acid. Explain your reasoning.

.....

.....

.....

..... [2]

- (ii) Describe and explain the relationship between the bond energy of the hydrogen halides in Graph 2 and the strength of acid in Table 8.2.

.....

.....

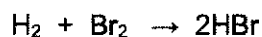
.....

..... [2]

- (d) (i) With reference to Graph 2, determine the bond energy of H-Br.

..... [1]

- (ii) The equation for the formation of HBr is as shown.



Given that the bond energy of the Br – Br bond is 193 kJ/mol and the bond energy of the H – H bond is 432 kJ/mol, calculate the enthalpy change of this reaction.

[2]


[Turn over

15

(iii) Draw an energy profile diagram for the formation of HBr.

Your diagram should include:

- the **formulae of the reactants and products**,
- labels to show the **enthalpy change of reaction** and **activation energy**.



[Turn over

PartnerIn Learning

- 9 Table 9.1 shows some information about Earth and some other planets.

The predicted surface temperature of each planet takes into account a number of factors including its distance from the Sun. The prediction does not take into account the absorption of heat energy by the atmosphere.

Table 9.1

	Earth	Venus	Mercury
distance from Sun/millions of km	150	108	58
predicted surface temperature/°C	-18	-41	163
actual surface temperature/°C	15	462	167
composition of atmosphere	78% N ₂ 21% O ₂ 0.04% CO ₂	97% CO ₂ (plus other gases)	none

- (a) Use the information in Table 9.1, explain the difference between the actual surface temperature and predicted surface temperature of each planet.

.....

.....

.....

.....

[2]

- (b) In Table 9.1, the term 'other gases' includes sulfur dioxide (SO₂).

- (i) Suggest a possible source for the sulfur dioxide in the atmosphere of Venus.

.....

[1]

- (ii) Rainwater never reaches the surface of Venus.

Use the information in Table 9.1 to suggest why.

.....

.....

[1]

[Turn over

17

- (c) Scientists think that the early atmosphere on Earth was similar to the atmosphere on Venus today.

After plant life appeared, the atmosphere on Earth changed.

- (i) Explain why plant life changed the percentages of oxygen and carbon dioxide on Earth.

.....

.....

.....

..... [2]

- (ii) Explain, in terms of processes involved, why the percentage of carbon dioxide on Earth is now increasing rapidly.

.....

..... [1]

[Total: 7]

[Turn over

Partnership Learning

EITHER

- 10 Carbon dioxide and hydrogen gas can be converted to methanol industrially. The following equations show the two main reactions that occur in the reactor.

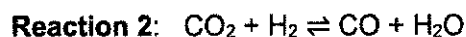
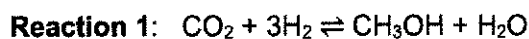


Fig. 10.1 shows the simplified diagram for the production of methanol.

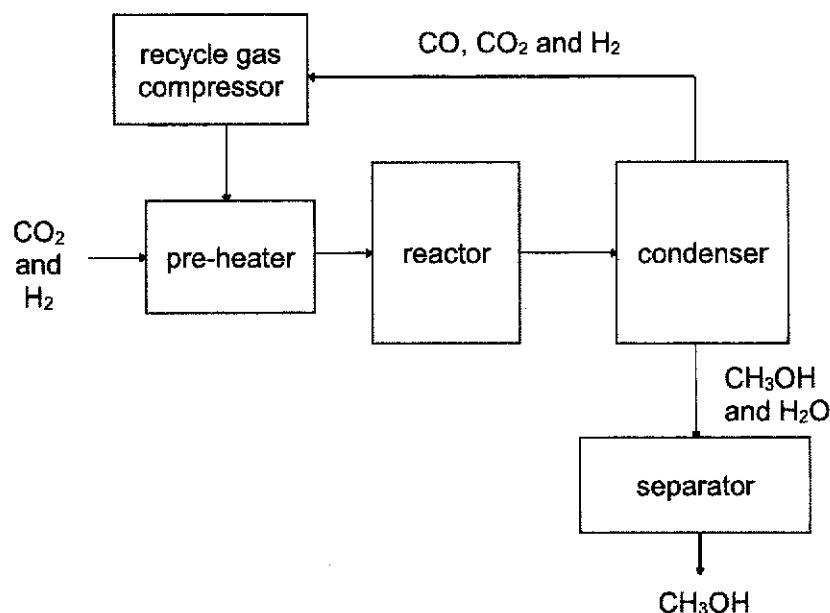


Fig. 10.1

- (a) Explain why it is **not** possible to obtain 100% yield of methanol for this reaction.

..... [1]

- (b) Name the separation technique that is used to separate methanol from water.

..... [1]

- (c) A mixture of palladium and copper acts as the catalyst in the reactor.

Explain why the cost of palladium would **not** contribute significantly to the monthly production cost of methanol.

..... [1]

[Turn over

- (d) Explain, in terms of collisions between (reacting) particles, how each of the following increases the **rate of reaction** in the production of methanol.

(i) pre-heating the gases

.....

.....

.....

..... [2]

(ii) compressing the gases

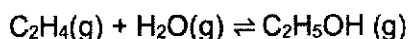
.....

.....

.....

..... [2]

- (e) Ethanol, C₂H₅OH, is in the same homologous series as methanol.
It can be made on an industrial scale by reacting ethene, C₂H₄, with steam in a reactor.



A volume of 1000 dm³ of ethene is measured at room temperature and pressure.
The ethene is mixed with steam and enters the reactor.
The yield of ethanol from the reaction is 10%.
Calculate the **mass** of ethanol formed at room temperature and pressure.
(One mole of gas occupies 24 dm³ at room temperature and pressure.)

[3]

[Total: 10]

[Turn over]

OR

- 10** An experiment was carried out to investigate the reaction between a solution of metal nitrate, $X(NO_3)_2$ and aqueous potassium iodide.

Using a measuring cylinder, 40 cm^3 of aqueous potassium iodide was poured into five different conical flasks. The solution of metal nitrate was then added to each conical flask using another measuring cylinder. The precipitate formed, XI_2 , was filtered, dried and weighed.

The results are recorded in Table 10.2.

Table 10.2

volume of $0.100\text{ mol/dm}^3\text{ KI/cm}^3$	40	40	40	40	40
volume of $0.100\text{ mol/dm}^3\text{ X(NO}_3)_2\text{ added/cm}^3$	10	15	20	25	30
mass of XI_2 formed/g	0.461	0.692	0.922	0.922	0.922

- (a) Write an ionic equation, with state symbols, for this reaction.

..... [1]

- (b) Calculate the number of moles in 40 cm^3 of KI solution.

[1]

- (c) (i) Given that the number of moles of 0.922 g of XI_2 is 0.002 mol. , calculate the relative atomic mass of X .

[2]

- (ii) Hence, identify metal X .

..... [1]

[Turn over

21

- (d) Predict the mass of XI_2 formed if 35 cm^3 of $\text{X}(\text{NO}_3)_2$ is added to 40 cm^3 of KI.
Explain your answer.

.....

..... [2]

- (e) Suggest **one** improvement that could be made to the experiment to obtain a more accurate result.

..... [1]

- (f) Describe **two** observations in the reaction between metal X and aqueous copper(II) sulfate.

.....

..... [2]

[Total: 10]

END OF PAPER

[Turn over

Partnership Learning

The Periodic Table of Elements

Group																	
I	II	Key										VII					
		proton (atomic) number atomic symbol name relative atomic mass															
3 Li lithium 7	4 Be beryllium 9	21 Sc scandium 45	22 Ti titanium 48	23 V vanadium 51	24 Cr chromium 52	25 Mn manganese 55	26 Fe iron 56	27 Co cobalt 59	28 Ni nickel 59	29 Cu copper 64	30 Zn zinc 65	31 Ga gallium 70	32 Ge germanium 73	33 As arsenic 75	34 Se selenium 79	35 Br bromine 80	36 Kr krypton 84
37 Rb rubidium 85	38 Sr strontium 88	39 Y yttrium 89	40 Zr zirconium 91	41 Nb niobium 93	42 Mo molybdenum 96	43 Tc technetium	44 Ru ruthenium 101	45 Rh rhodium 103	46 Pd palladium 106	47 Ag silver 108	48 Cd cadmium 112	49 In indium 115	50 Sn tin 119	51 Sb antimony 122	52 Te tellurium 128	53 I iodine 127	54 Xe xenon 131
55 Cs caesium 133	56 Ba barium 137	57-71 lanthanoids	72 Hf hafnium 178	73 Ta tantalum 181	74 W tungsten 184	75 Re rhenium 186	76 Os osmium 190	77 Ir iridium 192	78 Pt platinum 195	79 Au gold 197	80 Hg mercury 201	81 Tl thallium 204	82 Pb lead 207	83 Bi bismuth 209	84 Po polonium	85 At astatine	86 Rn radon
87 Fr francium	88 Ra radium	89-103 actinoids	104 Rf rutherfordium	105 Db dubnium	106 Sg seaborgium	107 Bh bohrium	108 Hs hassium	109 Mt meitnerium	110 Ds darmstadtium	111 Rg roentgenium	112 Cn copernicium	114 Fl flerovium	116 Lv livermorium	117 Ts tennessine	118 Og oganesson	119 Nh nihonium	120 Ds darmstadtium

lanthanoids																
57 La lanthanum 139	58 Ce cerium 140	59 Pr praseodymium 141	60 Nd neodymium 144	61 Pm promethium	62 Sm samarium 150	63 Eu europium 152	64 Gd gadolinium 157	65 Tb terbium 159	66 Dy dysprosium 163	67 Ho holmium 165	68 Er erbium 167	69 Tm thulium 169	70 Yb ytterbium 173	71 Lu lutetium 175		
actinoids																
89 Ac actinium	90 Th thorium 232	91 Pa protactinium 231	92 U uranium 238	93 Np neptunium	94 Pu plutonium	95 Am americium	96 Cm curium	97 Bk berkelium	98 Cf californium	99 Es einsteinium	100 Fm fermium	101 Md mendelevium	102 No nobelium	103 Lr lawrencium		

Volume of one mole of any gas is 24 dm^3 at room temperature and pressure (r.t.p.).

Marking Scheme for 4E Prelim 2021

P1 [40 marks]

1	C	2	D	3	A	4	A	5	B
6	C	7	A	8	B	9	B	10	D
11	B	12	B	13	B	14	D	15	A
16	D	17	D	18	D	19	C	20	C
21	D	22	B	23	D	24	A	25	A
26	B	27	C	28	D	29	B	30	C
31	D	32	B	33	B	34	B	35	A
36	B	37	C	38	B	39	A	40	D

Turn over

P2 – to minus 1m from overall for any missing units

Section A [50 marks]

- 1 (ai) aluminium chloride and iron(III) chloride [1]
 (aii) silver chloride [1]
 (aiii) hydrogen chloride [1]
 (aiv) copper(II) chloride / iron(III) chloride [1]
 if students write both correct answers – to still award [1]
 (av) ammonium chloride [1]
 (b) test: add excess aqueous ammonia until no further change [1]
 reject – add ammonia / add aqueous ammonia / add aqueous sodium hydroxide

observation for aluminium chloride:

white ppt. observed, insoluble in excess [1]

observation for zinc chloride:

white ppt. observed, soluble in excess giving a colourless solution [1]

reject – white ppt. observed, soluble in excess

- 2 (a) Citric acid dissolves / ionises / dissociates in water to produce H^+ ions [1] and react with sodium hydrogencarbonate to produce carbon dioxide/ a gas. [1]
 (b) test: bubble the gas into limewater
 observation: odourless and colourless gas forms white ppt. in limewater
 [1] for both test & observation
 to only award ecf [1] if correct test & observation of stated gas given, based on students' answer in (a)

- 3 (a) mistake: In student 1's set-up, the baseline is in / under the ethanol. [1]
 mistake: in student 2's set-up, the baseline is drawn in ink. / there is no lid. [1]

(b)

coloured pigments	R_f value	distance travelled (cm)
light blue	0.2	<u>0.50 / 0.5</u>
dark pink	0.4	1.00
dark blue	0.6	<u>1.50 / 1.5</u>

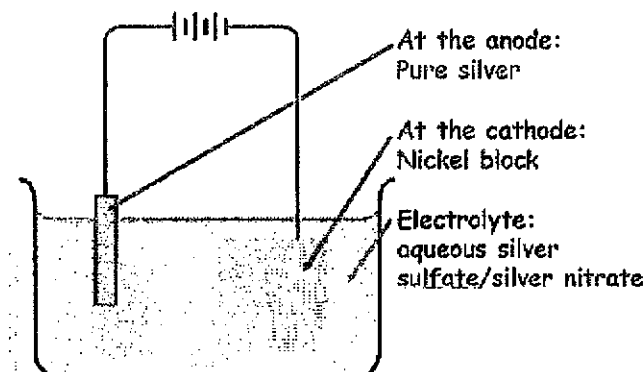
[1]

[Turn over

- 4 (ai) Zn is oxidised as the oxidation state of Zn increases from 0 to +2 in $\text{Zn}(\text{NO}_3)_2$. [1]
 $\text{Ni}(\text{NO}_3)_2$ is reduced as the oxidation state of Ni decreases from +2 in $\text{Ni}(\text{NO}_3)_2$ to 0 in Ni. [1]
 reject – correct explanation without stating the substance oxidised & reduced

- (aii) $\text{Zn}(\text{s}) + \text{Ni}^{2+}(\text{aq}) \rightarrow \text{Zn}^{2+}(\text{aq}) + \text{Ni}(\text{s})$ [1]
 reject – without state symbols

- (bi) Electroplating a nickel rectangular block with silver



[1] - diagram

[1] – labelling of anode as pure silver, cathode as nickel block and electrolyte as aqueous silver salt

- (bii) anode: $\text{Ag}(\text{s}) \rightarrow \text{Ag}^+(\text{aq}) + \text{e}^-$ [1]
 cathode: $\text{Ag}^+(\text{aq}) + \text{e}^- \rightarrow \text{Ag}(\text{s})$ [1]
 reject – without state symbols

- 5 (a) As solubility of Group II hydroxides increases down the Group, (from $0.000160 \text{ mol/dm}^3$ for $\text{Mg}(\text{OH})_2$ to 0.410 mol/dm^3 for $\text{Ba}(\text{OH})_2$), the concentration of OH^- increases / more OH^- present. [1]

- (b) Accept any value between 0.0250 to 0.410 mol/dm^3 [1]

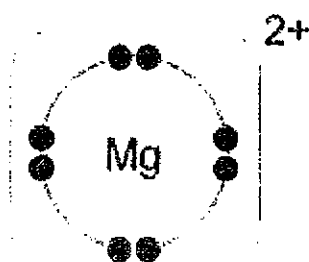
- (ci) Al_2O_3 , SiO_2 , P_2O_5 , SO_2 and Cl_2O [1]

Al_2O_3 is an amphoteric oxide, SiO_2 , P_2O_5 , SO_2 and Cl_2O are acidic oxides will react with $\text{Ba}(\text{OH})_2$, which is basic in nature. [1]

- (cii) It is a solid at r.t.p. since it has a high melting point. [1]

A lot of energy is required to overcome the strong electrostatic forces of attraction between the oppositely charged ions (Mg^{2+} and O^{2-}) in its giant ionic lattice structure. [1]

- (ciii)



[1]

[1]

- (civ) SiO_2 - More heat energy is required to break the extensive, strong covalent bonds between (the Si and O) atoms in its giant three-dimensional molecular structure. [1]

SO_2 - Lesser heat energy is required to overcome the weak Van der Waals forces / intermolecular forces of attraction between the SO_2 molecules in its simple molecular structure. [1]

Hence SiO_2 has a higher melting point than SO_2 .

(cv)

element	P	O	
% by mass	43.7	56.3	
A_r	31	16	
no of mol	$43.7 \div 31$ $= 1.4096$	$56.3 \div 16$ $= 3.5187$	[1]
divide by the smallest no of mol	$1.4096 \div 1.4096$ $= 1$	$3.5187 \div 1.4096$ $= 2.496$	
mol ratio	2	5	[1]

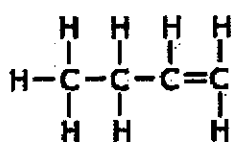
Hence the empirical formula of this oxide is P_2O_5 .

- (d) relative atomic mass = $[76(35) + 24(37)] / 100$ [1]
 $= 35.5$ (to 3 s.f.) [1]
 reject – if final ans is not evaluated to 3 s.f.

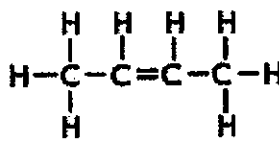
- 6 (a) Fuel for aircraft / jet engine / used in candles / wax paper / polishes / cosmetics / electrical insulators [1]

(bi) Propene/ C_3H_6 [1]

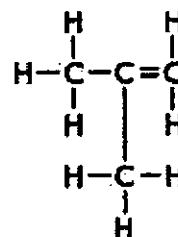
(bii)



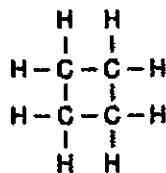
1-butene



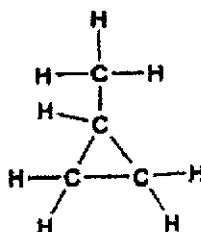
2-butene



2-methylpropene



cyclobutane



methycyclopropane

[1] each for any 2 isomers – no need to name the isomers

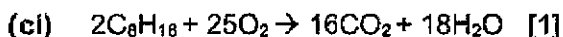
[Turn over

(biii)

reagent	observation for propane	observation for butene
add aqueous bromine/bromine solution [1]	aqueous bromine/bromine solution remains reddish-brown	aqueous bromine/bromine solution decolourises/change from reddish-brown to colourless

[1] – correct reagent

[1] – correct observation for both propane and butane

(cii) Energy absorbed to break the bonds in C_8H_{18} (or C-H, C-C bonds) and O_2 (or O=O bonds) + energy released when form bonds in CO_2 (or C=O bonds) and H_2O (or O-H bonds). [1]

Energy absorbed is less than energy released/energy released is more than energy absorbed. [1]

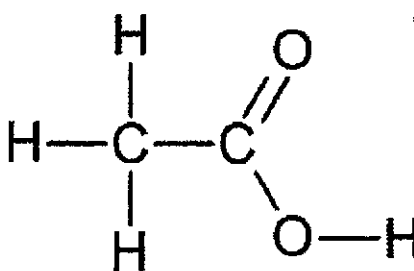
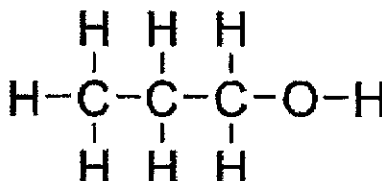
- 7 (a)
1. same functional group --COO--
 2. successive members differs by $\text{--CH}_2\text{--}$
 3. same general formula, $\text{CH}_3\text{COOC}_n\text{H}_{2n+1}$
 4. boiling point increases with the (relative) molecular mass of compound

[1] each for any 2 evidences

(b) methyl ethanoate [1] reject – wrong spelling

It has the smallest (relative) molecular mass of 74 hence greatest rate of diffusion. [1]

(c)

carboxylic acid	alcohol
 <p>name: ethanoic acid [1] for structure and name</p>	 <p>name: propanol [1] for structure and name</p>

Section B [30 marks]

8 (ai) Reacts slowly in sunlight and does not react in the dark. [1]

(aii) Platinum is added as a catalyst / to speed up the reaction. [1]

(b) As the bond length of the hydrogen halide increases, the bond energy decreases. /
As the bond length of the hydrogen halide decreases, the bond energy increases [2]
reject – if cause and effect is reversed

(ci) The strongest acid is hydroiodic acid. [1]

It has the highest K_a value of 3.0×10^9 , hence dissociates the most among the acids listed. [1]

(cii) As the bond energy increases, the strength of the acid decreases. [1]

This is because more energy is required to break the bonds between the atoms. Hence, it is more difficult to dissociate in water, and hence, strength of acid would decrease. [1]

(di) 346 kJ/mol [1]

(dii) $H_2 + Br_2 \rightarrow 2HBr$

$$\Delta H_{\text{bond breaking}} = 432 + 193$$

$$= +625 \text{ kJ/mol}$$

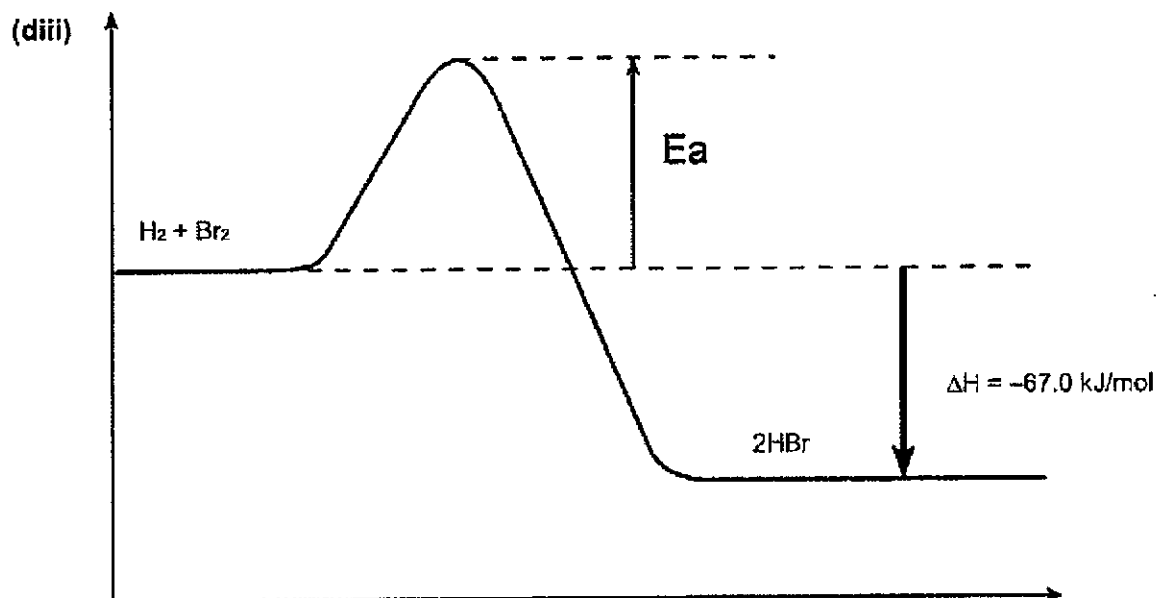
$$\Delta H_{\text{bond formation}} = 2(-346)$$

$$= -692 \text{ kJ/mol}$$

$$\Delta H_{\text{overall}} = +625 + (-692)$$

$$= -67.0 \text{ kJ/mol} \quad [1]$$

[1] for either calculating $\Delta H_{\text{bond breaking}}$ or $\Delta H_{\text{bond formation}}$



correct formula of reactants and products [1]

correct label for activation energy – double arrow is accepted too and correct label for enthalpy change [1] – to award ecf if (dii) is an endothermic reaction

[Turn over

- 9 (a) The actual surface temperature is closest to the predicted temperature for Mercury since it does not have an atmosphere of gases.

The actual surface temperature of Venus is about 500 °C higher than its predicted temperature, since 97% of its atmosphere is CO₂, a greenhouse gas that traps heat.

The actual surface temperature of Earth is about 33 °C higher than its predicted temperature, since 0.04% of its atmosphere is CO₂, a greenhouse gas that traps heat.

[1] – for correct reason supported with info from the table for any planet.

[2] – for correct reason supported with info from the table for all 3 planets.

- (bi) Volcanoes [1]

reject – burning of fossil fuels

- (bii) At 462 °C, water would have evaporated / boiled to form water vapour / steam since water has a boiling point of 100 °C. [1]

- (ci) In the presence of sunlight, plants take in carbon dioxide gas and give out oxygen gas to undergo photosynthesis. [1]

This thus decreases the percentage of carbon dioxide gas and increases the percentage of oxygen gas on Earth. [1]

- (cii) Deforestation decreases the number of plants taking in carbon dioxide in the presence of sunlight during photosynthesis, hence increasing the percentage of carbon dioxide gas. / Burning of fossil fuels increases the percentage of carbon dioxide gas. [1]

- 10 (a) As it is a reversible reaction, some reactants will remain. / In reaction 2, some carbon dioxide may be used to react with hydrogen to form carbon monoxide instead. [1]

E

- (b) Simple/Fractional distillation [1]
reject – wrong spelling

- (c) The palladium catalyst will not be used up and hence it does not need to be replaced monthly. [1]

- (di) When temperature increases, particles gain KE and move faster. [1]
Collision between particles becomes more frequent, hence increasing the frequency of effective collisions. [1] Speed of reaction thus increases.

- (dii) Compressing the gases increases the pressure.
When pressure increases, particles are closer together. [1]
Collision between particles becomes more frequent, hence increasing the frequency of effective collisions. [1] Speed of reaction thus increases.

ITurn over

(e) no of mol of ethene = $1000 \div 24$ [1]
 $= 41.667 \text{ mol}$

comparing mol ratio

$$\begin{array}{lcl} \text{ethane} & : & \text{ethanol} \\ 1 & : & 1 \\ 41.667 \text{ mol} & : & 41.667 \text{ mol} \end{array}$$

actual no of mol of ethanol formed since yield is 10% = $10\% \times 41.667 \text{ mol}$ [1]
 $= 4.1667 \text{ mol}$

mass of ethanol formed = $4.1667 \times [2(12) + 6(1) + 16]$
 $= 192 \text{ g (to 3 s.f.)}$ [1]

10 (a) $X^{2+}(\text{aq}) + 2I^{-}(\text{aq}) \rightarrow XI_2(\text{s})$ [1] – correct ionic equation with state symbols included
 O

(b) no of mol of KI = $40/1000 \times 0.100$
 $= 0.00400 \text{ mol}$ [1] – with working shown clearly

(ci) Mr of $XI_2 = 0.922 / 0.002$ [1]
 $= 461$
 Ar of X = $461 - 2(127)$
 $= 207$ [1]

(cii) X is lead/Pb [1]

(d) 0.922 g [1]

Since 35 cm^3 of $X(\text{NO}_3)_2$ is added to the same volume of KI in this reaction, KI is the limiting reagent/limiting reactant, [1] hence the mass of the precipitate formed remains constant at 0.922 g.

(e) Use a burette to measure out the volume of the solutions [1]

(f) Blue solution turns colourless/decolourises [1]
 Pink/reddish-brown solid/deposit observed [1]

[Turn over

