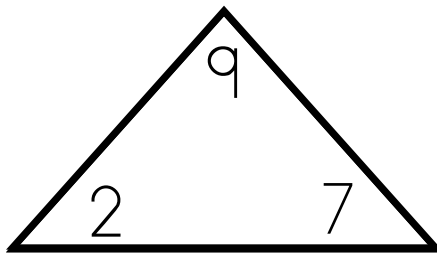
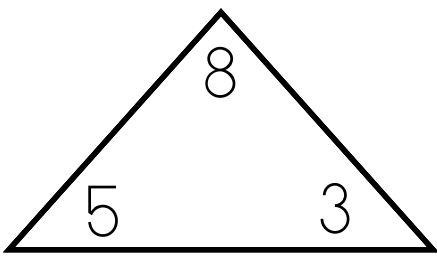


Name _____

Date _____



___ + ___ = ___

___ + ___ = ___

___ + ___ = ___

___ + ___ = ___

___ = ___ + ___

___ = ___ + ___

___ = ___ + ___

___ = ___ + ___

___ - ___ = ___

___ - ___ = ___

___ - ___ = ___

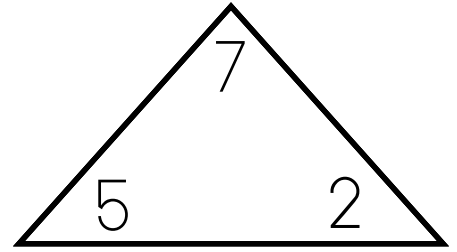
___ - ___ = ___

___ = ___ - ___

___ = ___ - ___

___ = ___ - ___

___ = ___ - ___



___ + ___ = ___

___ + ___ = ___

___ = ___ + ___

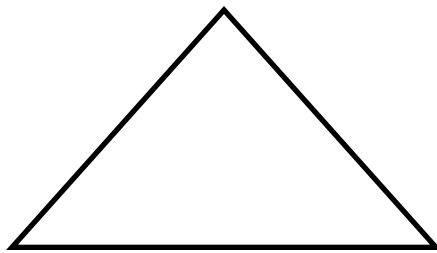
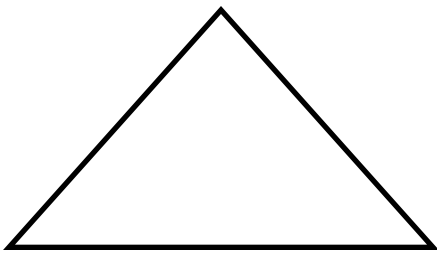
___ = ___ + ___

___ - ___ = ___

___ - ___ = ___

___ = ___ - ___

___ = ___ - ___



___ + ___ = ___

___ + ___ = ___

___ + ___ = ___

___ + ___ = ___

___ = ___ + ___

___ = ___ + ___

___ = ___ + ___

___ = ___ + ___

___ - ___ = ___

___ - ___ = ___

___ - ___ = ___

___ - ___ = ___

___ = ___ - ___

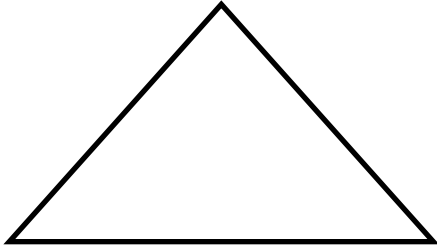
___ = ___ - ___

___ = ___ - ___

___ = ___ - ___

Name _____

Date _____



$$\underline{\quad} + \underline{\quad} = \underline{\quad}$$

$$\underline{\quad} + \underline{\quad} = \underline{\quad}$$

$$\underline{\quad} = \underline{\quad} + \underline{\quad}$$

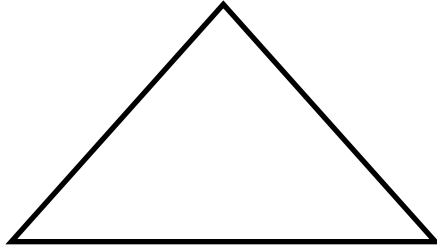
$$\underline{\quad} = \underline{\quad} + \underline{\quad}$$

$$\underline{\quad} - \underline{\quad} = \underline{\quad}$$

$$\underline{\quad} - \underline{\quad} = \underline{\quad}$$

$$\underline{\quad} = \underline{\quad} - \underline{\quad}$$

$$\underline{\quad} = \underline{\quad} - \underline{\quad}$$



$$\underline{\quad} + \underline{\quad} = \underline{\quad}$$

$$\underline{\quad} + \underline{\quad} = \underline{\quad}$$

$$\underline{\quad} = \underline{\quad} + \underline{\quad}$$

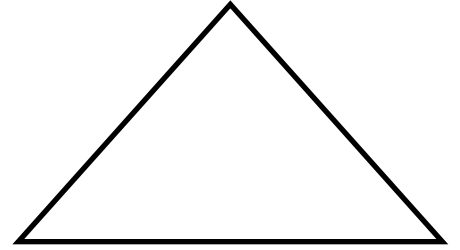
$$\underline{\quad} = \underline{\quad} + \underline{\quad}$$

$$\underline{\quad} - \underline{\quad} = \underline{\quad}$$

$$\underline{\quad} - \underline{\quad} = \underline{\quad}$$

$$\underline{\quad} = \underline{\quad} - \underline{\quad}$$

$$\underline{\quad} = \underline{\quad} - \underline{\quad}$$



$$\underline{\quad} + \underline{\quad} = \underline{\quad}$$

$$\underline{\quad} + \underline{\quad} = \underline{\quad}$$

$$\underline{\quad} = \underline{\quad} + \underline{\quad}$$

$$\underline{\quad} = \underline{\quad} + \underline{\quad}$$

$$\underline{\quad} - \underline{\quad} = \underline{\quad}$$

$$\underline{\quad} - \underline{\quad} = \underline{\quad}$$

$$\underline{\quad} = \underline{\quad} - \underline{\quad}$$

$$\underline{\quad} = \underline{\quad} - \underline{\quad}$$