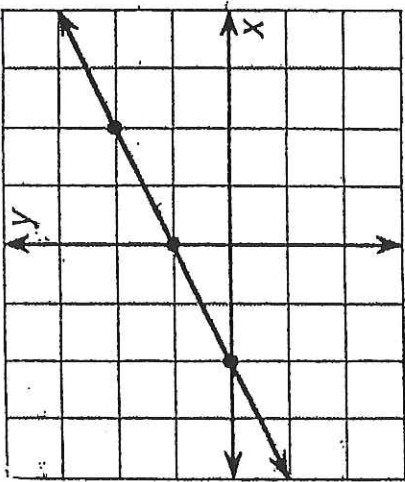


Names _____

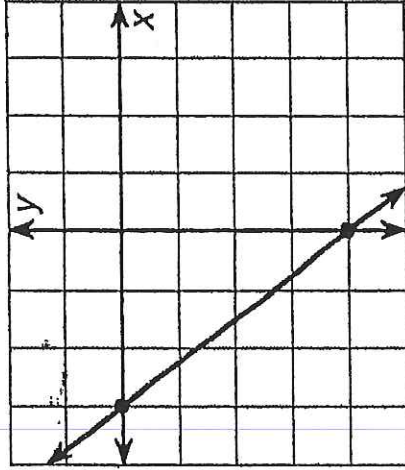
Date _____

Slopes and Intercepts

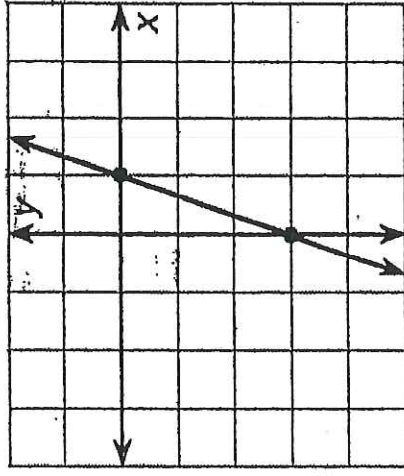
Find the slope and intercepts for each line.



1. slope _____
2. x-intercept _____
3. y-intercept _____



4. slope _____
5. x-intercept _____
6. y-intercept _____



7. slope _____
8. x-intercept _____
9. y-intercept _____