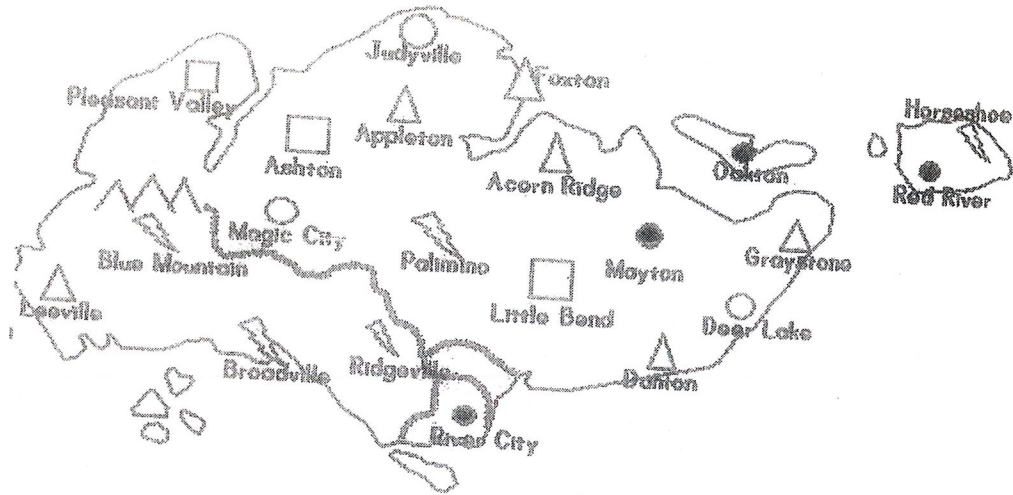







POPULATION MAPS



Legend Box

				
1,000-5,000	5,000-25,000	25,000-50,000	50,000-100,000	over 100,000

1. Name the five cities with a population of 50,000 – 100,000. _____
2. Name the three towns with a population over 100,000. _____
3. Which is bigger- Pleasant Valley or Mayton? _____
4. Which town has more people- River City or Magic City? _____
5. Which town has more people- Judyville or Danton? _____
6. Which is larger- Little Bend or Ridgeville? _____
7. Which city is smaller- Blue Mountain or Deer Lake? _____
8. How many towns have 1,000 – 5,000 people? _____
9. How many towns have 5,000-25,000 people? _____
10. Are there more people in Horseshoe or Red River? _____
11. How many towns have 50,000 – 100,000 people? _____
12. Which has a larger population- Graystone or Oakton? _____