







Write the multiplication for each.

Parham - A.M.I #22
3rd Math

1.  <hr/>	2.  <hr/>	3.  <hr/>
4.  <hr/>	5.  <hr/>	6.  <hr/>

Complete the table below.

X	1	2	3	4	5	6	7	8	9	10
2	<input type="text"/>	<input type="text"/>	<input type="text"/>	<input type="text"/>	<input type="text"/>	<input type="text"/>	<input type="text"/>	<input type="text"/>	<input type="text"/>	<input type="text"/>

Find the product.

$\begin{array}{r} 2 \\ \times 2 \\ \hline \end{array}$	$\begin{array}{r} 4 \\ \times 2 \\ \hline \end{array}$	$\begin{array}{r} 2 \\ \times 9 \\ \hline \end{array}$	$\begin{array}{r} 2 \\ \times 7 \\ \hline \end{array}$	$\begin{array}{r} 1 \\ \times 2 \\ \hline \end{array}$	$\begin{array}{r} 6 \\ \times 2 \\ \hline \end{array}$
--	--	--	--	--	--

Write the multiplication sentence the drawing shows.

