



Problem Solving Posttest A

Name _____

Date _____

Try to solve as many of the problems as possible. Show your work using numbers, pictures, words, and/or symbols. Write each answer on the line below the problem.

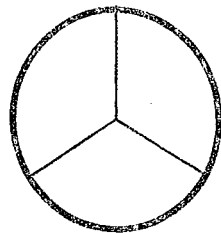
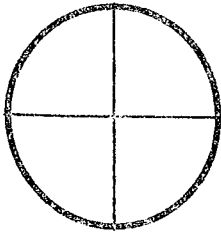
1. Taylor has a photo album with 4 pages. Each page will hold 6 pictures. How many pictures will the album hold in all?

Answer: _____

2. Bob wants to buy a gel pen that costs 87¢. He has one quarter, two dimes, nickel, and a penny. How much more money does he need?

Answer: _____


3. Shelton and Gary each ordered a pizza. Shelton ate $\frac{1}{4}$ of his pizza. Gary ate $\frac{1}{3}$ of his pizza. Who ate the most pizza?



Answer: _____

4. Megan found 3 seashells on the beach. Emily found 4 more than Megan. How many shells did they find together?

Answer: _____



Problem Solving Pretest A

Name _____

Date _____

Try to solve as many of the problems as possible. Show your work using numbers, pictures, words, and/or symbols. Write each answer on the line below the problem.

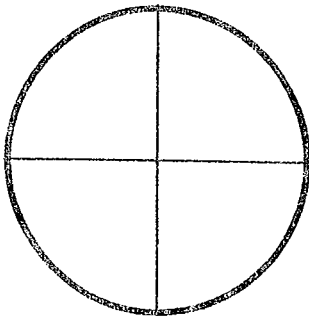
1. Tracy has a photo album with 5 pages. Each page will hold 4 pictures. How many pictures will the album hold in all?

Answer: _____

2. Gerald wants to buy a gel pen that costs 95¢. He has two quarters, a dime, and a penny. How much more money does he need?

Answer: _____

3. Omar and Randy ordered a pizza together. Omar ate $\frac{1}{4}$ of the pizza and Randy ate $\frac{1}{2}$ of the pizza. Who ate the most?



Answer: _____

4. Jayda found 5 seashells on the beach. Ruby found twice as many as Jayda. How many shells did they find together?

Answer: _____