

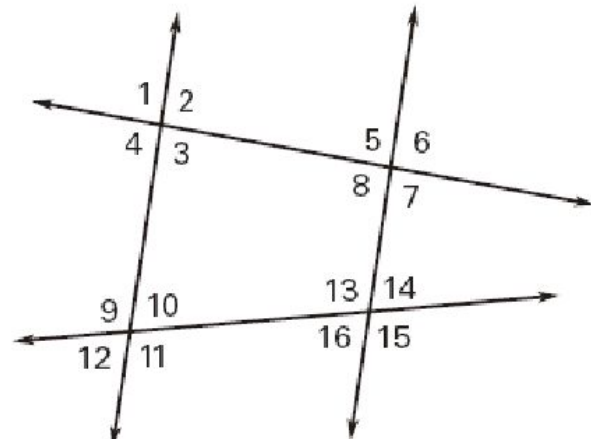
Name \_\_\_\_\_

Geometry, Period \_\_\_\_\_

The following assignment will be due the first day back to school from an AMI day. This assignment must be completed and returned at the beginning of class to receive credit of attendance. We will be available to answer questions via email, [amy.fisher@sccsd.k12.ar.us](mailto:amy.fisher@sccsd.k12.ar.us); [frankj@sccsd.k12.ar.us](mailto:frankj@sccsd.k12.ar.us); [jonesm@sccsd.k12.ar.us](mailto:jonesm@sccsd.k12.ar.us); and [neumeierh@sccsd.k12.ar.us](mailto:neumeierh@sccsd.k12.ar.us) from 8 am – 3:25 pm. Please be patient on responses, the weather may affect internet service.

Classify each angle pair as *corresponding*, *interior*, *alternate exterior*, *consecutive interior*, *consecutive exterior*.

*alternate*  
*or*



a)  $\angle 1$  and  $\angle 9$  \_\_\_\_\_

b)  $\angle 8$  and  $\angle 13$  \_\_\_\_\_

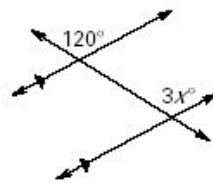
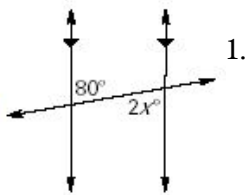
c)  $\angle 6$  and  $\angle 16$  \_\_\_\_\_

d)  $\angle 4$  and  $\angle 10$  \_\_\_\_\_

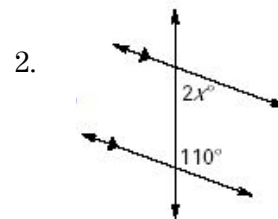
e)  $\angle 8$  and  $\angle 16$  \_\_\_\_\_

f)  $\angle 10$  and  $\angle 13$  \_\_\_\_\_

For the following diagrams, state the type of angles that are given, state their relationship, and then find x.



3.

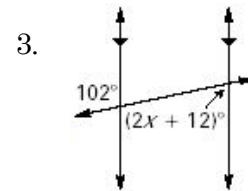
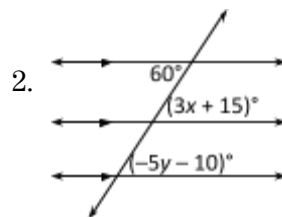
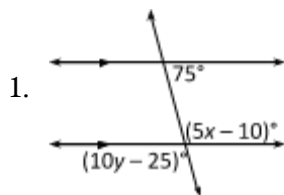


Name \_\_\_\_\_

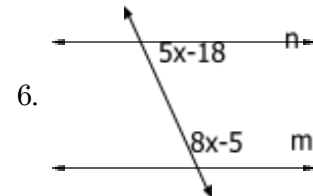
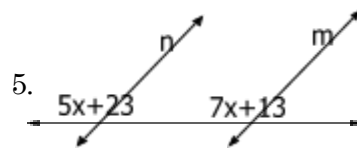
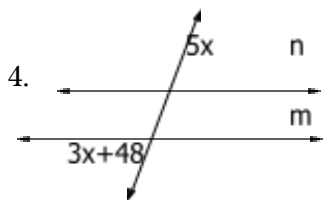
Geometry, Period \_\_\_\_\_

The following assignment will be due the first day back to school from an AMI day. This assignment must be completed and returned at the beginning of class to receive credit of attendance. We will be available to answer questions via email, [amy.fisher@sccsd.k12.ar.us](mailto:amy.fisher@sccsd.k12.ar.us); [frankj@sccsd.k12.ar.us](mailto:frankj@sccsd.k12.ar.us); [jonesm@sccsd.k12.ar.us](mailto:jonesm@sccsd.k12.ar.us); and [neumeierh@sccsd.k12.ar.us](mailto:neumeierh@sccsd.k12.ar.us) from 8 am – 3:25 pm. Please be patient on responses, the weather may affect internet service.

Find the missing variables.



Find the value of  $x$  so that  $n \parallel m$ . State the theorem or postulate that justifies your solution.



$x =$

\_\_\_\_\_

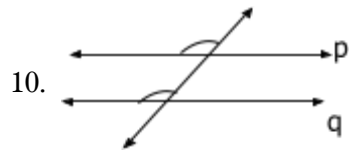
$x =$

\_\_\_\_\_

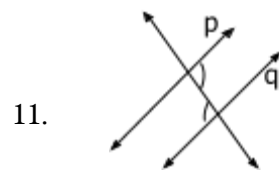
$x =$

\_\_\_\_\_

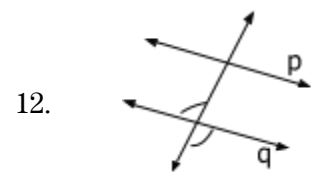
Can you prove that lines p and q are parallel? If so, state the theorem or postulate that you would use.



\_\_\_\_\_



\_\_\_\_\_



\_\_\_\_\_

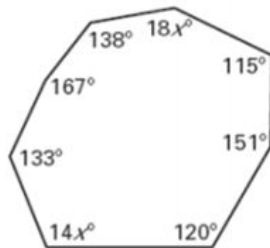
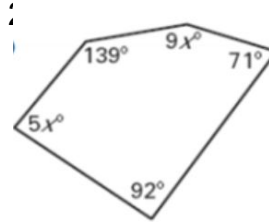
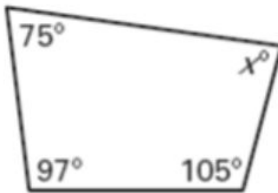
Name \_\_\_\_\_

Geometry, Period \_\_\_\_\_

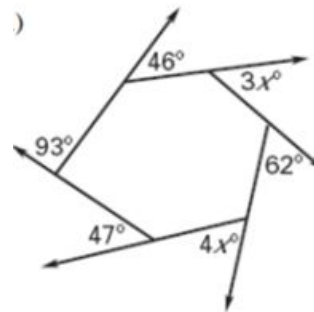
The following assignment will be due the first day back to school from an AMI day. This assignment must be completed and returned at the beginning of class to receive credit of attendance. We will be available to answer questions via email, [amy.fisher@sccsd.k12.ar.us](mailto:amy.fisher@sccsd.k12.ar.us); [frankj@sccsd.k12.ar.us](mailto:frankj@sccsd.k12.ar.us), [jonesm@sccsd.k12.ar.us](mailto:jonesm@sccsd.k12.ar.us); and [neumeierh@sccsd.k12.ar.us](mailto:neumeierh@sccsd.k12.ar.us) from 8 am – 3:25 pm. Please be patient on responses, the weather may affect internet service.

Using the Interior Angles of a Polygon Formula, find the value of  $x$ . Be sure to show all work.

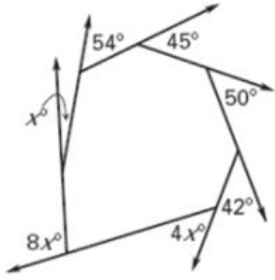
1.



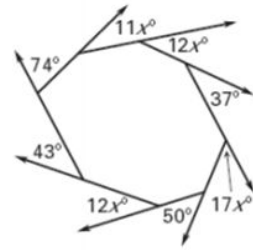
3.



4.



5.



6.

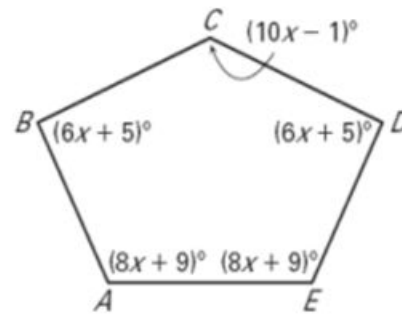
Name \_\_\_\_\_

Geometry, Period \_\_\_\_\_

The following assignment will be due the first day back to school from an AMI day. This assignment must be completed and returned at the beginning of class to receive credit of attendance. We will be available to answer questions via email, [amy.fisher@sccsd.k12.ar.us](mailto:amy.fisher@sccsd.k12.ar.us); [frankj@sccsd.k12.ar.us](mailto:frankj@sccsd.k12.ar.us), [jonesm@sccsd.k12.ar.us](mailto:jonesm@sccsd.k12.ar.us); and [neumeierh@sccsd.k12.ar.us](mailto:neumeierh@sccsd.k12.ar.us) from 8 am – 3:25 pm. Please be patient on responses, the weather may affect internet service.

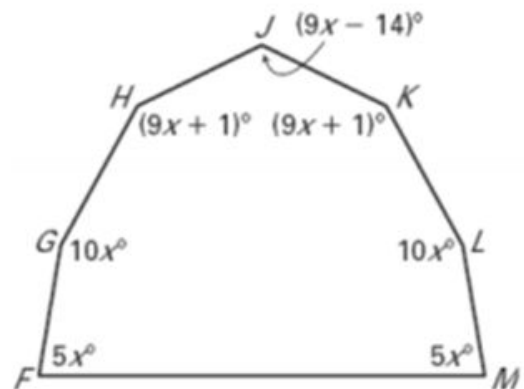
1.  
below. Find the value of  $x$ . Then determine the

The side view of a light fixture is shown  
measure of each angle.



2.  
shown. Find the value of  $x$ . Then find the measure of

The front view of a camping tent is shown.  
each angle of the tent.

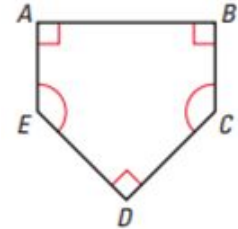


Name \_\_\_\_\_

Geometry, Period \_\_\_\_\_

The following assignment will be due the first day back to school from an AMI day. This assignment must be completed and returned at the beginning of class to receive credit of attendance. We will be available to answer questions via email, [amy.fisher@sccsd.k12.ar.us](mailto:amy.fisher@sccsd.k12.ar.us); [frankj@sccsd.k12.ar.us](mailto:frankj@sccsd.k12.ar.us); [jonesm@sccsd.k12.ar.us](mailto:jonesm@sccsd.k12.ar.us); and [neumeierh@sccsd.k12.ar.us](mailto:neumeierh@sccsd.k12.ar.us) from 8 am – 3:25 pm. Please be patient on responses, the weather may affect internet service.

A home plate for a baseball field is a pentagon as shown.



1. Is the polygon regular? Explain why or why not.
2. What is the sum of the interior angles? Be sure to show your work in the space below.
3. Find the measures of  $\angle C$  and  $\angle E$ .

You are constructing a regular hexagonal wooden bench like the one shown.

4. On the bench  $\angle 1 \cong \angle 2$ . Find the measures of  $\angle 1$  and  $\angle 2$ , so that you know what angle to use to cut the pieces of wood.



Name \_\_\_\_\_

Geometry, Period \_\_\_\_\_

The following assignment will be due the first day back to school from an AMI day. This assignment must be completed and returned at the beginning of class to receive credit of attendance. We will be available to answer questions via email, [amy.fisher@sccsd.k12.ar.us](mailto:amy.fisher@sccsd.k12.ar.us); [frankj@sccsd.k12.ar.us](mailto:frankj@sccsd.k12.ar.us); [jonesm@sccsd.k12.ar.us](mailto:jonesm@sccsd.k12.ar.us); and [neumeierh@sccsd.k12.ar.us](mailto:neumeierh@sccsd.k12.ar.us) from 8 am – 3:25 pm. Please be patient on responses, the weather may affect internet service.

1)  $6(v - 1) + 8v = -90$

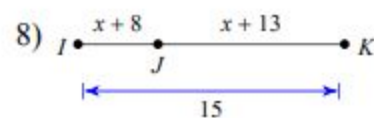
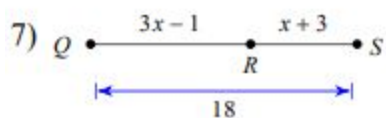
2)  $5(8x - 2) = -250$

3)  $-2x + \frac{6}{5} - \frac{14}{5}x = \frac{72}{5}$

4)  $\frac{1}{2}a + \frac{1}{6}a = \frac{5}{6}$

5)  $\frac{181}{18} + 2x = \frac{7}{3}\left(x + \frac{25}{6}\right)$

6)  $\frac{3}{4}p - \frac{1}{2}\left(\frac{7}{5}p + 1\right) = -1\frac{2}{5}p - \frac{1}{2}$

**Solve for  $x$ .**

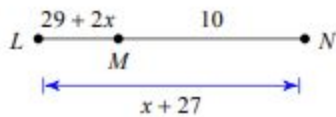
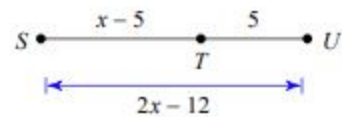


Name \_\_\_\_\_

Geometry, Period \_\_\_\_\_

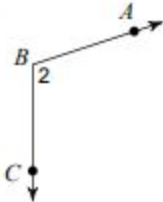
The following assignment will be due the first day back to school from an AMI day. This assignment must be completed and returned at the beginning of class to receive credit of attendance. We will be available to answer questions via email, [amy.fisher@sccsd.k12.ar.us](mailto:amy.fisher@sccsd.k12.ar.us); [frankj@sccsd.k12.ar.us](mailto:frankj@sccsd.k12.ar.us); [jonesm@sccsd.k12.ar.us](mailto:jonesm@sccsd.k12.ar.us); and [neumeierh@sccsd.k12.ar.us](mailto:neumeierh@sccsd.k12.ar.us) from 8 am – 3:25 pm. Please be patient on responses, the weather may affect internet service.

**Find the length indicated.**

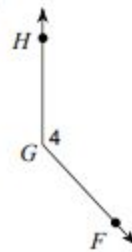
9) Find  $LM$ 10) Find  $SU$ 

**Name each angle in four ways.**

11)



12)



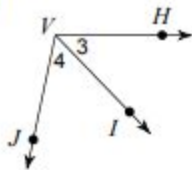
Name \_\_\_\_\_

Geometry, Period \_\_\_\_\_

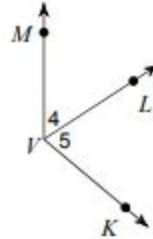
The following assignment will be due the first day back to school from an AMI day. This assignment must be completed and returned at the beginning of class to receive credit of attendance. We will be available to answer questions via email, [amy.fisher@sccsd.k12.ar.us](mailto:amy.fisher@sccsd.k12.ar.us); [frankj@sccsd.k12.ar.us](mailto:frankj@sccsd.k12.ar.us); [jonesm@sccsd.k12.ar.us](mailto:jonesm@sccsd.k12.ar.us); and [neumeierh@sccsd.k12.ar.us](mailto:neumeierh@sccsd.k12.ar.us) from 8 am – 3:25 pm. Please be patient on responses, the weather may affect internet service.

Name all the angles that have  $V$  as a vertex.

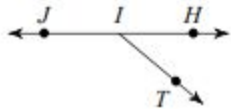
13)



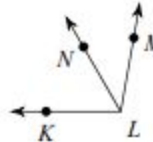
14)



15) Find  $m\angle TIJ$  if  $m\angle HIT = 40^\circ$  and  $m\angle HIJ = 180^\circ$ .



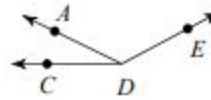
16) Find  $m\angle KLM$  if  $m\angle KLN = 60^\circ$  and  $m\angle NLM = 40^\circ$ .



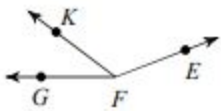
- 17)  $m\angle KJB = 1 + 7x$ ,  $m\angle BJI = 150^\circ$ ,  
and  $m\angle KJI = 58x - 2$ . Find  $x$ .



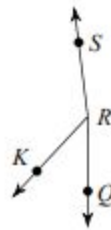
- 18) Find  $x$  if  $m\angle CDE = 16x + 8$ ,  
 $m\angle ADE = 9 + 13x$ , and  $m\angle CDA = 26^\circ$ .



- 19) Find  $x$  if  $m\angle KFE = 20x + 2$ ,  
 $m\angle GFK = 1 + 6x$ , and  $m\angle GFE = 159^\circ$ .



- 20)  $m\angle QRK = 10x + 3$ ,  $m\angle KRS = 2 + 32x$ ,  
and  $m\angle QRS = 173^\circ$ . Find  $x$ .



Name \_\_\_\_\_

Geometry, Period \_\_\_\_\_

The following assignment will be due the first day back to school from an AMI day. This assignment must be completed and returned at the beginning of class to receive credit of attendance. We will be available to answer questions via email, [amy.fisher@sccsd.k12.ar.us](mailto:amy.fisher@sccsd.k12.ar.us); [frankj@sccsd.k12.ar.us](mailto:frankj@sccsd.k12.ar.us); [jonesm@sccsd.k12.ar.us](mailto:jonesm@sccsd.k12.ar.us); and [neumeierh@sccsd.k12.ar.us](mailto:neumeierh@sccsd.k12.ar.us) from 8 am – 3:25 pm. Please be patient on responses, the weather may affect internet service.

**C is collinear with & between A and E. For each problem, draw a picture representing the three points and the information given. Solve for indicated.**

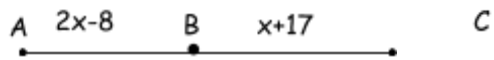
1. If  $AC = 24$  in. and  $CE = 13$  in.,  $AE =$  \_\_\_\_\_.
2. If  $CE = 7$  in. and  $AE = 23$  in.,  $AC =$  \_\_\_\_\_.

**Find QR in the following problems. R is collinear with & between Q and S.**

3. If  $RS = 44.6$  and  $SQ = 68.4$ , find QR.
4. If  $RS = 33.5$  and  $RQ = 80$ , find SQ.

**Refer to the figure and the given information to find each measure.**

5. Given :  $AC = 39$  m

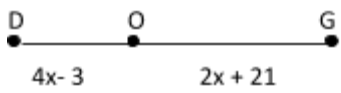


$x =$  \_\_\_\_\_

$AB =$  \_\_\_\_\_

$BC =$  \_\_\_\_\_

6. Given the figure and  $DG = 60$  ft.



$x =$  \_\_\_\_\_

$DO =$  \_\_\_\_\_

$OG =$  \_\_\_\_\_

Name \_\_\_\_\_

Geometry, Period \_\_\_\_\_

The following assignment will be due the first day back to school from an AMI day. This assignment must be completed and returned at the beginning of class to receive credit of attendance. We will be available to answer questions via email, [amy.fisher@sccsd.k12.ar.us](mailto:amy.fisher@sccsd.k12.ar.us); [frankj@sccsd.k12.ar.us](mailto:frankj@sccsd.k12.ar.us); [jonesm@sccsd.k12.ar.us](mailto:jonesm@sccsd.k12.ar.us); and [neumeierh@sccsd.k12.ar.us](mailto:neumeierh@sccsd.k12.ar.us) from 8 am – 3:25 pm. Please be patient on responses, the weather may affect internet service.

If U is collinear with & between T and B, find the value of x and the lengths of the segments. Draw a picture for each problem with the given information, then write the equation to solve.

1.  $TU = 2x$ ,  $UB = 3x + 1$ ,  $TB = 21$

$x =$  \_\_\_\_\_

$TU =$  \_\_\_\_\_

$UB =$  \_\_\_\_\_

$TB =$  \_\_\_\_\_

2.  $TU = 4x - 1$ ,  $UB = 2x - 1$ ,  $TB = 5x$

$x =$  \_\_\_\_\_

$TU =$  \_\_\_\_\_

$UB =$  \_\_\_\_\_

$TB =$  \_\_\_\_\_

Write an equation for the each:

3. Segment AB is congruent to segment BC \_\_\_\_\_

4.  $\overline{XY} \cong \overline{AB}$  \_\_\_\_\_

5. Point B bisects segment AC \_\_\_\_\_

6.  $2x + 5$  is equal to  $4x - 8$  \_\_\_\_\_

7. Point A is the midpoint of segment PT \_\_\_\_\_

For 8-12, suppose  $\overline{RS}$  is congruent to  $\overline{MN}$ . For each set of lengths, solve for  $x$ , and find the length of each segment. For 11-12,  $\overline{AB} \cong \overline{BC}$ .

8.  $RS = 3x + 17$ ,  $MN = 7x - 15$

9.  $RS = x + 10$ ,  $MN = 2x + 4$

$x =$  \_\_\_\_\_

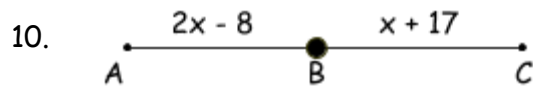
$x =$  \_\_\_\_\_

$RS =$  \_\_\_\_\_

$RS =$  \_\_\_\_\_

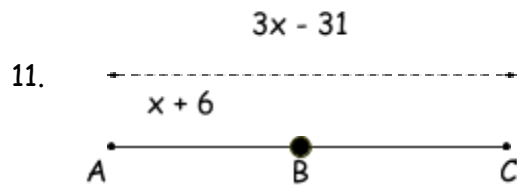
$MN =$  \_\_\_\_\_

$MN =$  \_\_\_\_\_



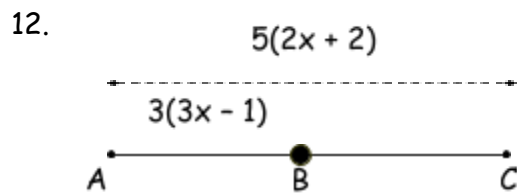
$x =$  \_\_\_\_\_  $AB =$  \_\_\_\_\_

$BC =$  \_\_\_\_\_  $AC =$  \_\_\_\_\_



$x =$  \_\_\_\_\_  $AB =$  \_\_\_\_\_

$BC =$  \_\_\_\_\_  $AC =$  \_\_\_\_\_



$x =$  \_\_\_\_\_  $AB =$  \_\_\_\_\_

$BC =$  \_\_\_\_\_  $AC =$  \_\_\_\_\_