

Room 8 Ms Terri

Homework

Due Date November 8, 2016

*Spelling Test is on
Monday*

Public Speaking Assignment

We will be having another Public Speaking Assignment due on Friday, November 12th. The children have learned about four seasons and typical weather patterns for each.

Their speech should include: Naming the Four Seasons with a simple sentence describing it, and telling which season is their favorite and why.

Their speech should only be 30 seconds – 1 minute in length. They are allowed to use a note card for reference if necessary.

**Thank you,
Ms. Terri**

Spelling Test # 7



*Spelling test will be given on Monday/Tuesday, _____

- Day # 1 Read each word and draw a line from scrambled word to unscrambled word.
- Day # 2 Read each word and write it on a separate piece of paper.
- Day # 3 Read each word and take a practice test.
- Day # 4 Write any words you got wrong on the practice test 3 times.

short vowel sounds – mix 2

- | | | |
|-----|--------|--------|
| 1. | red | mdi |
| 2. | blue | itl |
| 3. | yellow | eulb |
| 4. | jam | ttim |
| 5. | lit | dre |
| 6. | cat | cit |
| 7. | kit | tik |
| 8. | tic | lywole |
| 9. | mitt | ajm |
| 10. | dim | tac |

A Super Story!


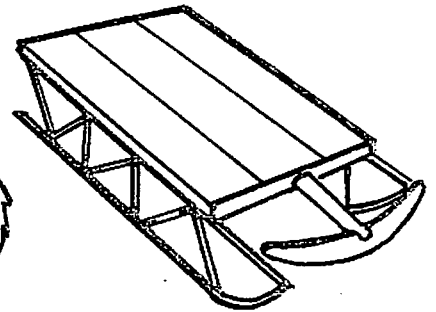






Date	Name of the Book	Parent's Signature

Read 20 minutes everyday.





Color the pictures that begin with the fl and fr sounds.





Color the pictures that begin with the dr and tr sounds.



Nouns: Nouns name a person, place, animal, or thing. Please draw a black triangle ▲ over the noun word in each sentence.

1. The cub is brown.

2. The tree is tall.

3. My mom is nice.

4. The jet is fast.


5. The hat was new.

Name _____

Nouns

park cow man truck

Person _____ _____ _____		Place _____ _____ _____	
Animal _____ _____ _____		Thing _____ _____ _____	



Directions: Have children cut out the pictures and paste them in the correct noun box. Then have them write the noun from the Word Box that names each person, place, animal, or thing in the picture. After children paste the pictures and write the nouns, they can color the pictures.



More Ending Sounds


Directions: Say each word. Listen for the ending sound. Write the missing letter.

1.




li_____

2.



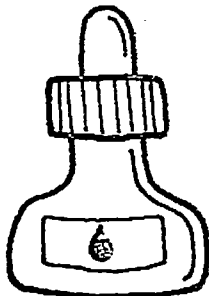
jee_____

3.



ca_____

4.




in_____

5.



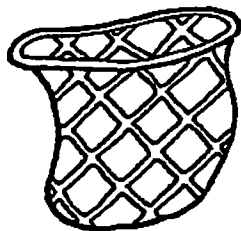
pe_____

6.




a_____

7.




ne_____

8.



ove_____

9.



we_____

Table Time

Place Value

Name _____

34

tens	ones

19

tens	ones

27

tens	ones

42

tens	ones

50

tens	ones

65

tens	ones

4

tens	ones

23

tens	ones

Name _____

Penny

A penny is a coin that is worth one cent.



front



back

One cent can be written different ways.

1¢


\$.01

one cent

Look at each coin. Color each penny brown.



Circle the correct amount for each group of pennies.



\$.01

\$.02

\$.03

three cents

two cents

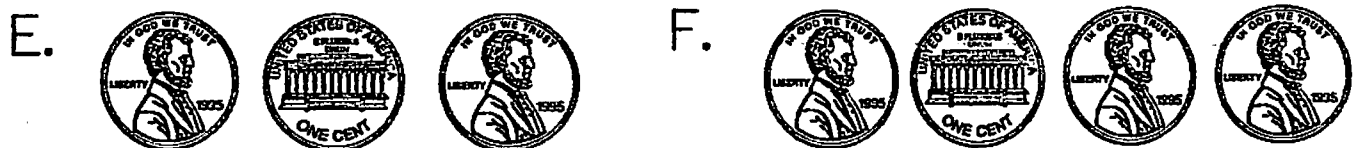
one cent

2¢

3¢

1¢

Write the amount for each group of pennies.



_____ ¢

_____ cents

Name _____

Nickel

A nickel is a coin that is worth five cents.



front



back

Five cents can be written different ways.

5¢

\$.05

five cents

Look at the coins. Draw an X on the coins that are not nickels.

A.



Circle each amount that shows five cents.

B. \$5.00 \$.50 \$.05 C. 50¢ 5¢ .5¢

Count by 5s to find the amount of money. Write the amounts.

D.



_____ ¢

E.



_____ ¢

F.



_____ ¢

G.




_____ ¢

Name: _____ Date: _____

Count All of Those Nuts!

Directions: Cross out the nuts to show the problem. Then, answer the questions.

1 The squirrel has 6 nuts. 

He ate 3 nuts.

How many nuts are left? _____

2 The squirrel has 7 nuts. 

He ate 4 nuts.

How many nuts are left? _____


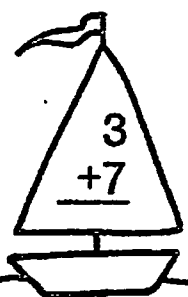
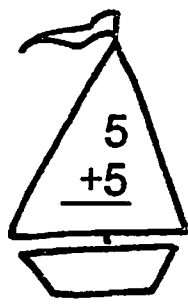
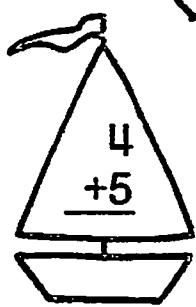
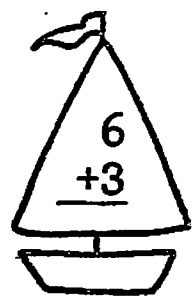
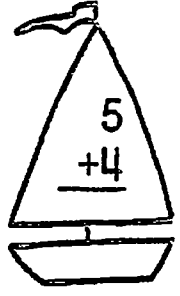
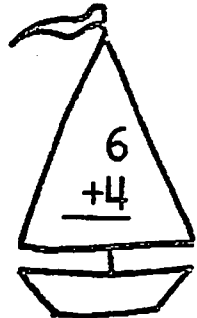
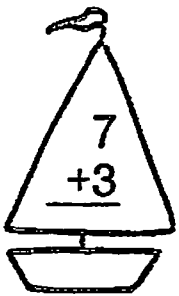
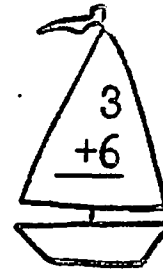

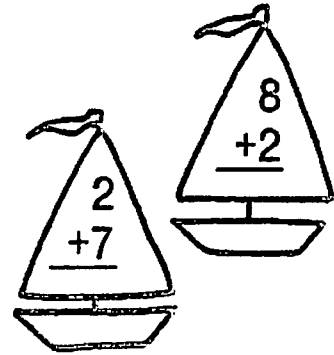

3 The squirrel has 7 nuts. 

He ate 5 nuts.

How many nuts are left? _____

Name _____

Skill: Sums 9, 10



Name: _____

	th	h	t	u
+	4	2	3	6
	2	2	2	2

	th	h	t	u
	7	0	1	2
	1	9	8	7

	th	h	t	u
-	8	4	3	2
	6	3	1	2

	th	h	t	u
	5	6	7	9
	1	3	8	2

thousands - green

hundreds - red

tens - blue

units - green