

Score \_\_\_\_\_

1. Miguel faces east and then turns <sup>(75)</sup>  $90^\circ$  clockwise. What direction is Miguel facing after the turn?

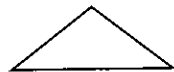
- A. north                      B. south  
C. east                         D. west

2. <sup>(57)</sup> Kiwis cost 89¢ per pound. What is the price for 7 pounds of kiwis?

3. <sup>(72)</sup> In darts, the sum of Julie's score and José's score was equal to Johnna's score. If Johnna's score was 91 and José's score was 37, what was Julie's score?

4. <sup>(70)</sup> One eighth of the 96 delegates were assigned to each room. How many delegates were assigned to each room?

5. <sup>(79)</sup> Draw a triangle congruent to this triangle. Then draw its line of symmetry.



6. <sup>(74)</sup> What fraction of the letters in the word MISSISSIPPI are not Is?

7. <sup>(77)</sup> The truck weighs 2 tons. How many pounds is 2 tons?

8. <sup>(77)</sup> Which is the more reasonable measure of weight for an adult human?

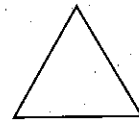
- A. 80 grams  
B. 80 kilograms

9. <sup>(78)</sup> Which triangle appears to be a scalene triangle?

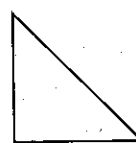
A.



B.



C.



D.



10. <sup>(31, 34)</sup> Seventy-five thousand, twenty-one dollars is how much greater than sixty-four thousand, nine hundred fifty-seven dollars?

11. Estimate the sum of 287 and 708.  
(59)

12. Lowell could paint 12 signs in 2 hours. How many signs could Lowell paint in 1 hour?  
(52)

13.  $4109 - (268 \times 8)$   
(45)

14.  $\$7.97 \times 7$   
(58)

15.  $64.8 + 2.17$   
(50)

16.  $4 \overline{)3228}$   
(80)

17.  $4321 \div 5$   
(76)

Find each missing number in problems 18 and 19.

18.  $287 = 7k$   
(41)

19. 
$$\begin{array}{r} 4642 \\ 1391 \\ + \quad h \\ \hline 8237 \end{array}$$

20. Use a symbol to compare the number of ounces in 1 pint to the number of ounces in 1 cup.  
(40)