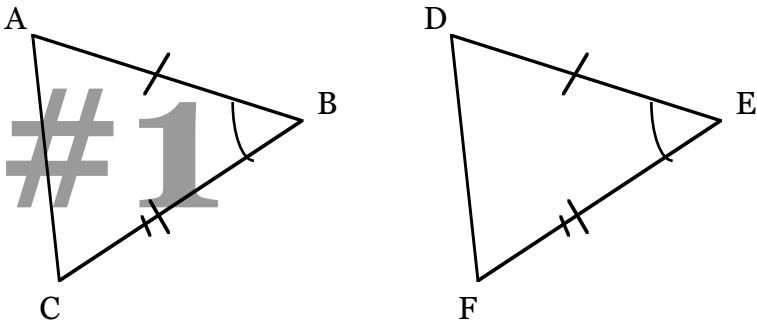


PROOFS LEVEL 1

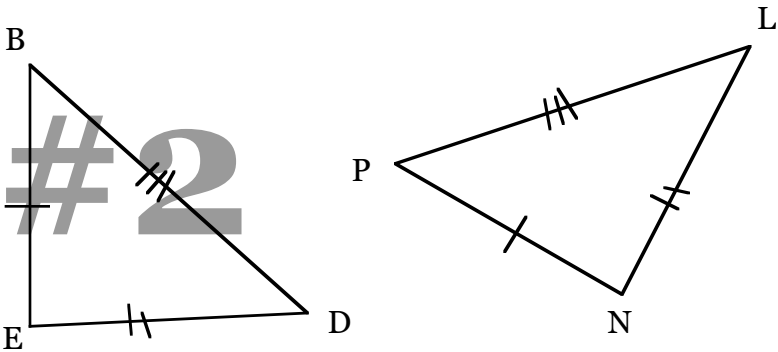
(name)

Prove: $\triangle ABC \cong \triangle DEF$



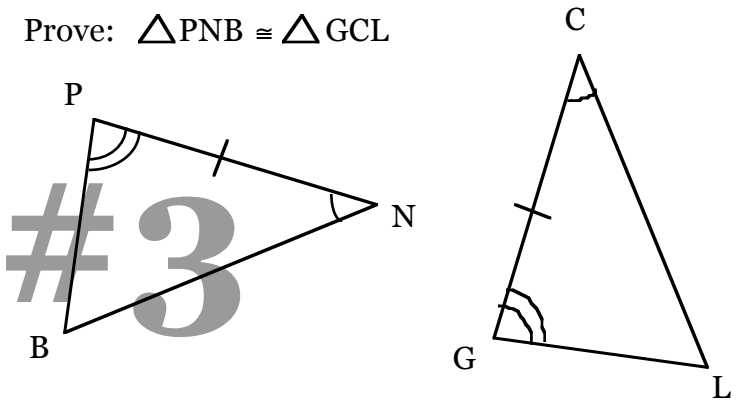
Statement	Reason

Prove: $\triangle BED \cong \triangle PNL$



Statement	Reason

Prove: $\triangle PNB \cong \triangle GCL$

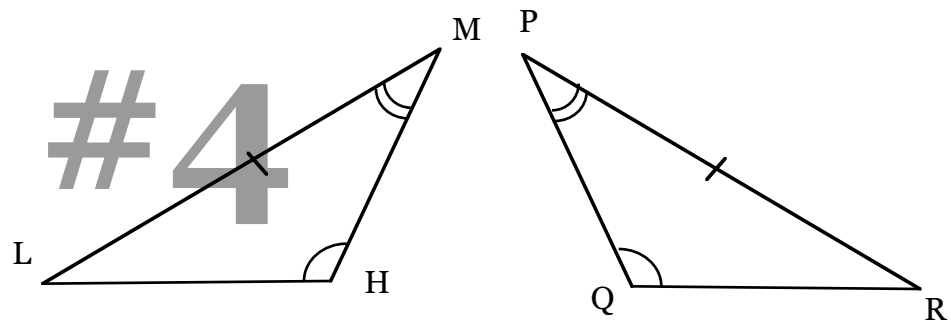


Statement	Reason

PROOFS LEVEL 1

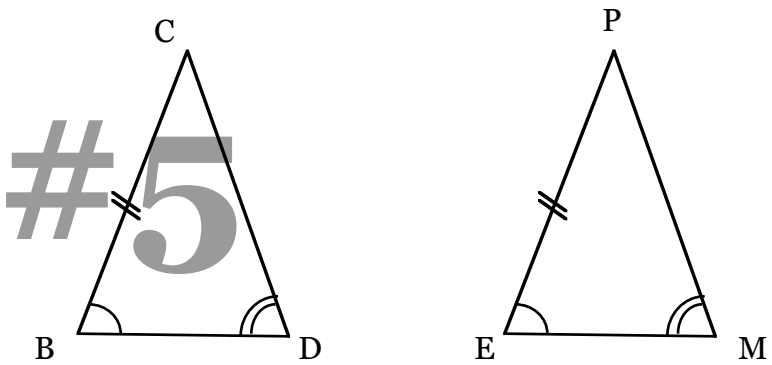
(name)

Prove: $\triangle LMH \cong \triangle RPQ$



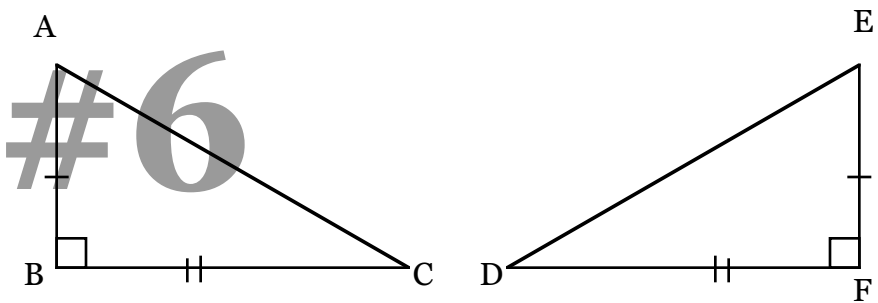
Statement	Reason

Prove: $\triangle CBD \cong \triangle PEM$



Statement	Reason

Prove: $\triangle ABC \cong \triangle EFD$



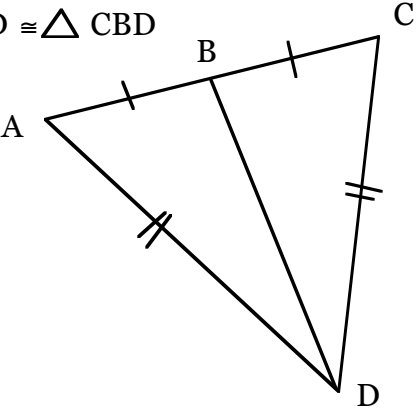
Statement	Reason

PROOFS LEVEL 2

(name)

#1

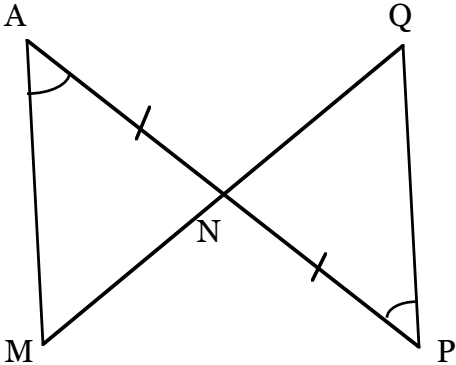
Prove: $\triangle ABD \cong \triangle CBD$



Statement	Reason

#2

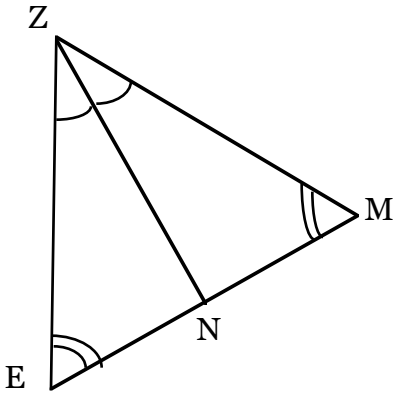
Prove: $\triangle ANM \cong \triangle PNQ$



Statement	Reason

#3

Prove: $\triangle ENZ \cong \triangle MNZ$



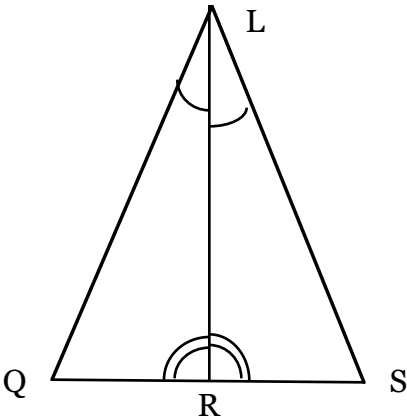
Statement	Reason

PROOFS LEVEL 2

(name)

#4

Prove: $\triangle QRL \cong \triangle SRL$

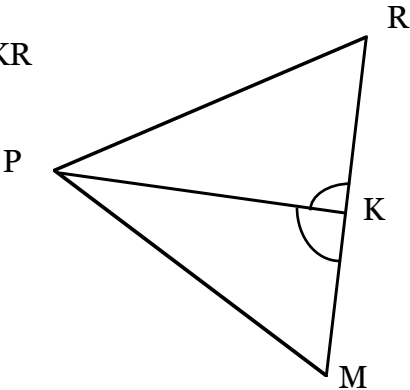


Statement	Reason

#5

Prove: $\triangle PKM \cong \triangle PKR$

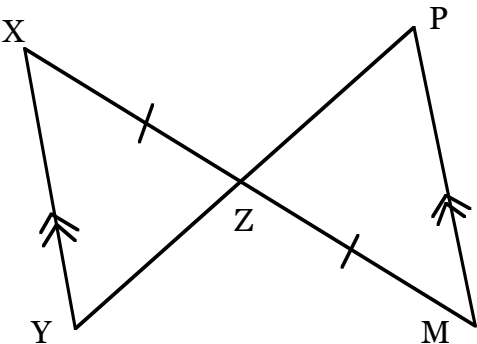
PK is the angle
bisector of
 $\angle RPM$.



Statement	Reason

#6

Prove: $\triangle XYZ \cong \triangle MPZ$



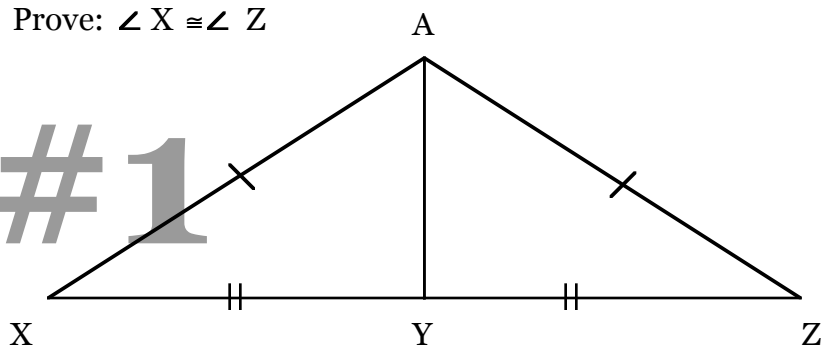
Statement	Reason

PROOFS LEVEL 3

(name)

Prove: $\angle X \cong \angle Z$

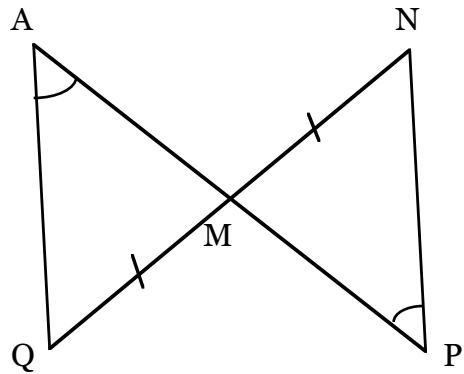
#1



Statement	Reason

Prove: $\overline{AQ} \cong \overline{PN}$

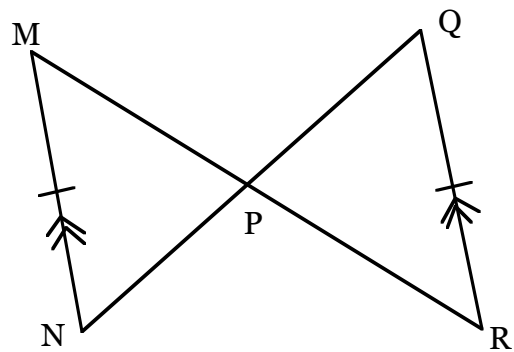
#2



Statement	Reason

Prove: $\overline{NP} \cong \overline{PR}$

#3

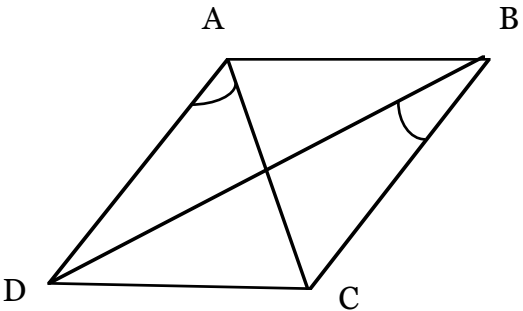


Statement	Reason

PROOFS LEVEL 3

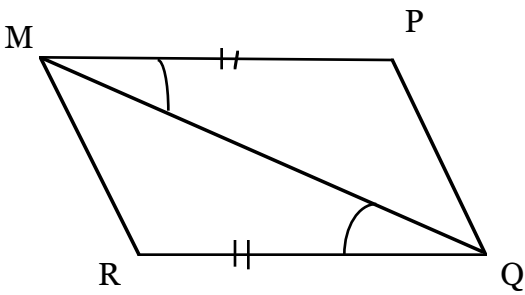
(name)

Prove: $\overline{AC} \cong \overline{BD}$
ABCD is a rhombus
#4



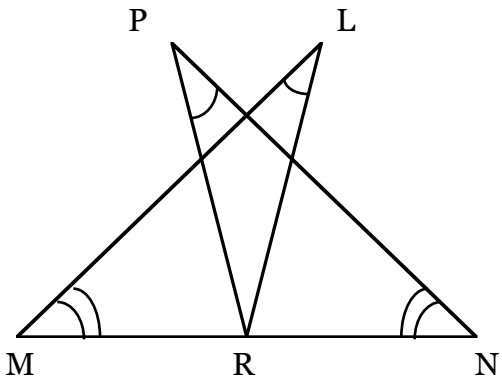
Statement	Reason

Prove: $\overline{MR} \cong \overline{PQ}$
#5



Statement	Reason

Prove: $\overline{PN} \cong \overline{LM}$
R is the midpoint of MN.
#6



Statement	Reason