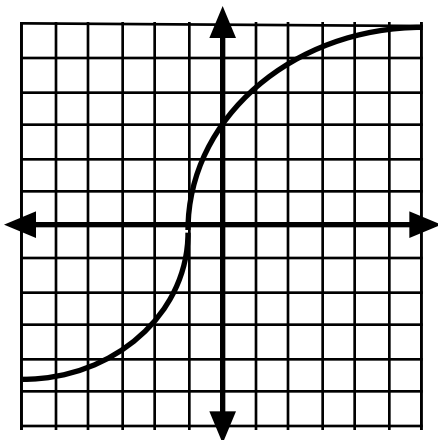


FUN-CTION PICTURES

Are these relationships functions? If not, why?

(name) _____



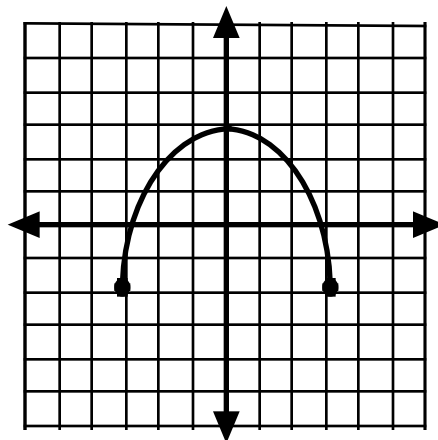
$f(-5) =$
 $f(-4) =$
 $f(-3) =$
 $f(-2) =$
 $f(-1) =$
 $f(0) =$
 $f(1) =$
 $f(2) =$
 $f(3) =$
 $f(4) =$
 $f(5) =$

Every item in the domain goes to an item in the range. ☐

Every item in the domain goes to only one item in the range. ☐

This is a function. ☐

If not, why not?



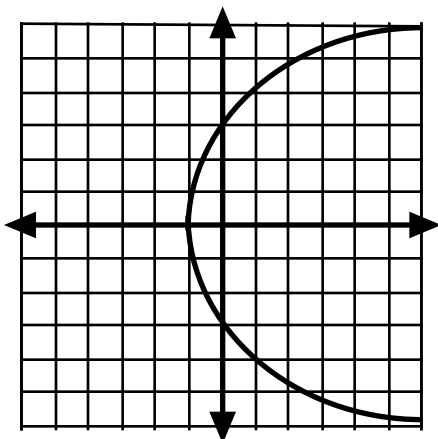
$f(-5) =$
 $f(-4) =$
 $f(-3) =$
 $f(-2) =$
 $f(-1) =$
 $f(0) =$
 $f(1) =$
 $f(2) =$
 $f(3) =$
 $f(4) =$
 $f(5) =$

Every item in the domain goes to an item in the range. ☐

Every item in the domain goes to only one item in the range. ☐

This is a function. ☐

If not, why not?



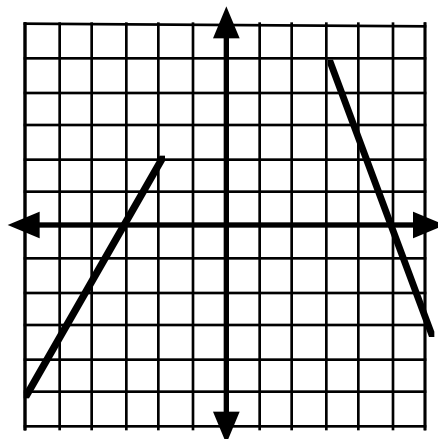
$f(-5) =$
 $f(-4) =$
 $f(-3) =$
 $f(-2) =$
 $f(-1) =$
 $f(0) =$
 $f(1) =$
 $f(2) =$
 $f(3) =$
 $f(4) =$
 $f(5) =$

Every item in the domain goes to an item in the range. ☐

Every item in the domain goes to only one item in the range. ☐

This is a function. ☐

If not, why not?



$f(-5) =$
 $f(-4) =$
 $f(-3) =$
 $f(-2) =$
 $f(-1) =$
 $f(0) =$
 $f(1) =$
 $f(2) =$
 $f(3) =$
 $f(4) =$
 $f(5) =$

Every item in the domain goes to an item in the range. ☐

Every item in the domain goes to only one item in the range. ☐

This is a function. ☐

If not, why not?

FUN-CTION PICTURES

Are these relationships functions? If not, why?

_____ (name)

