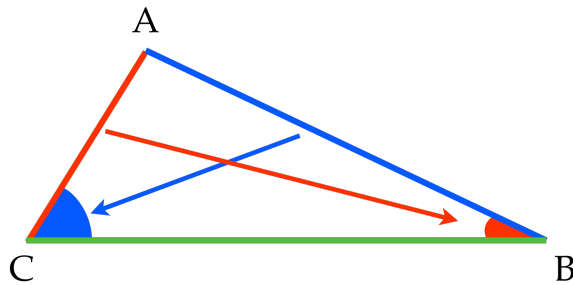


Triangle Angle-Side Correspondence

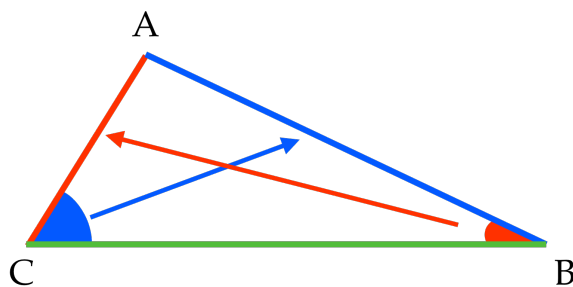


$$AB > AC$$

$$m\angle C > m\angle B$$

If one **side** of a triangle is larger than another **side**, then the **angle** opposite the larger **side** is larger than the **angle** opposite the shorter **side**.

Triangle Angle-Side Correspondence



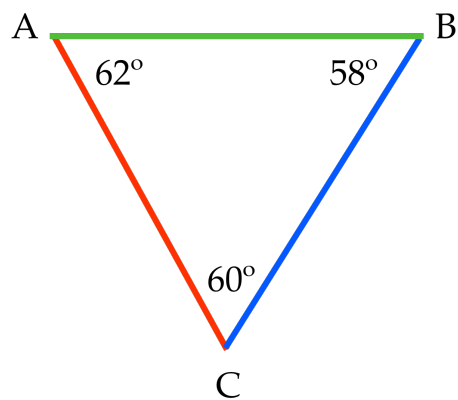
$$m\angle C > m\angle B$$

$$AB > AC$$

If one **angle** of a triangle is larger than another **angle**, then the **side** opposite the larger **angle** is larger than the **side** opposite the shorter **angle**.

Triangle Angle-Side Correspondance

Write the sides in order from shortest to longest.



Triangle Angle-Side Correspondance

Write the angles in order from smallest to largest.

