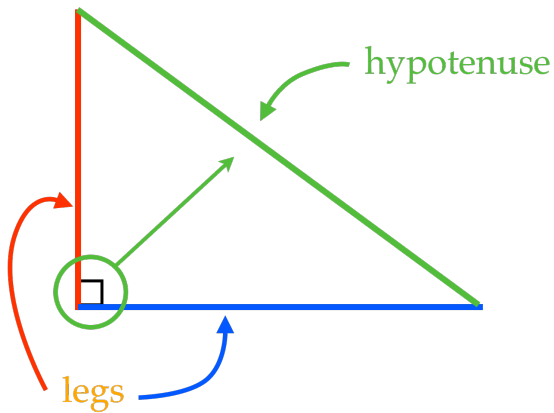
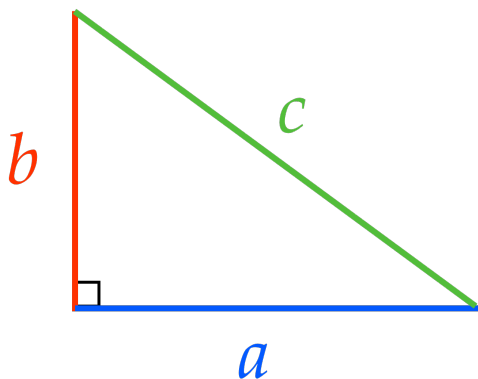


In a right triangle, the **sum of the squares** of the **legs** is equal to the **square of the hypotenuse**.



$$(\text{leg})^2 + (\text{leg})^2 = (\text{hypotenuse})^2$$

In a right triangle, the **sum of the squares** of the **legs** is equal to the **square of the hypotenuse**.



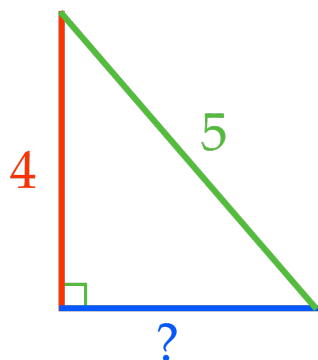
$$(\text{leg})^2 + (\text{leg})^2 = (\text{hypotenuse})^2$$

$$a^2 + b^2 = c^2$$

In a right triangle, the **sum of the squares** of the **legs** is equal to the **square of the hypotenuse**.

$$a^2 + b^2 = c^2$$

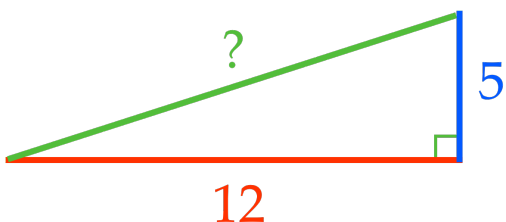
Find the length of the missing side.



In a right triangle, the **sum of the squares** of the **legs** is equal to the **square of the hypotenuse**.

$$a^2 + b^2 = c^2$$

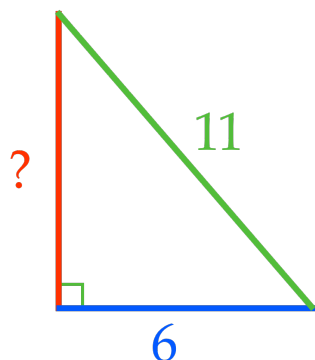
Find the length of the missing side.



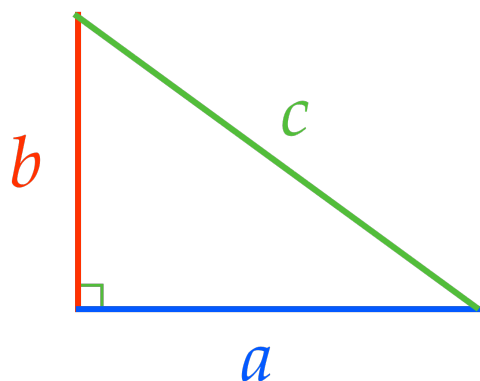
In a right triangle, the **sum of the squares** of the **legs** is equal to the **square of the hypotenuse**.

$$a^2 + b^2 = c^2$$

Find the length of the missing side.



In a right triangle, the **sum of the squares** of the **legs** is equal to the **square of the hypotenuse**.



$$(\text{leg})^2 + (\text{leg})^2 = (\text{hypotenuse})^2$$

$$a^2 + b^2 = c^2$$