

### Worksheet 3.7

Intro to Music Theory  
gracemusic.us/theory


Name \_\_\_\_\_

A. For each scale, write the key signature and a one-octave ascending scale (with accidentals, if needed).

c natural minor:




f# harmonic minor:



a harmonic minor:



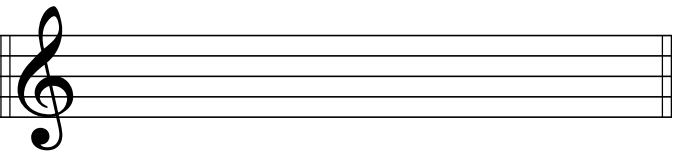
g harmonic minor:



b natural minor:




b $\flat$  harmonic minor:



e harmonic minor:




f harmonic minor:



B. For the following scales, write the key signature and a one-octave ascending *and* descending scale.

g# melodic minor:



c# melodic minor:

