







Worksheet 2.5

Intro to Music Theory
gracemusic.us/theory

Name _____

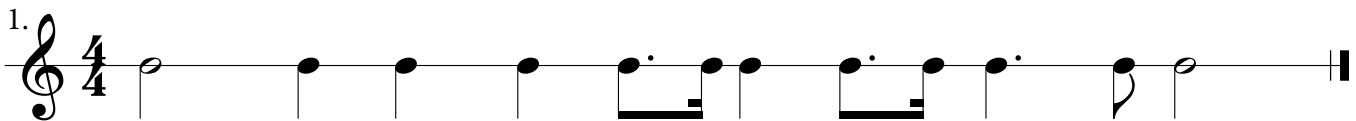
A. Write how many beats each note value receives.

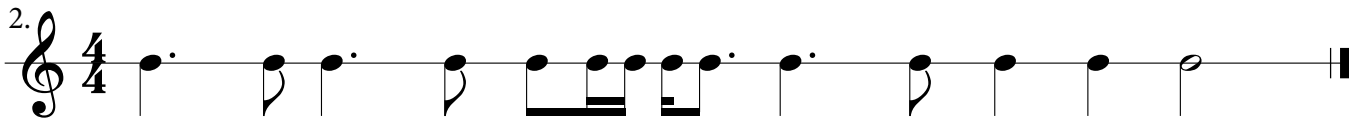
 = _____  = _____  = _____

 = _____  = _____  = _____

 = _____  = _____

B. Add barlines to the following examples to notate them in 4/4 time, then write the beat numbers above the staff.

1. 

2. 

3. 