

Name: _____ Date: _____

Identify the Fractions

Write the numerator and denominator for the fraction shown on each number line.




Fraction

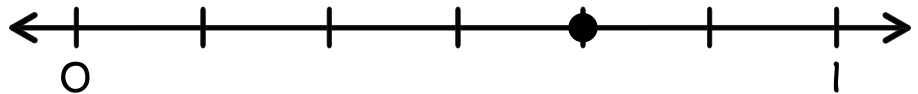
Number Line

Example:

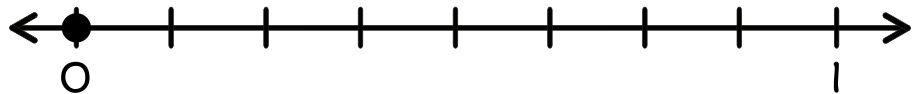
$$\frac{2}{3}$$




1.




2.



3.



4.



5.



6. Challenge Question: Draw a number line and record the fraction $\frac{2}{2}$.

