


Name: _____ Date: _____

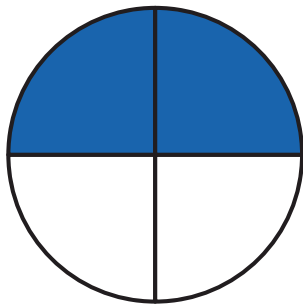
Create Fractions

Use what you know about fractions to answer the questions.

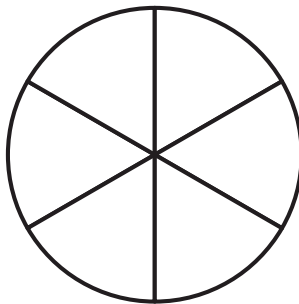


1. Color these shapes to create the fractions below.

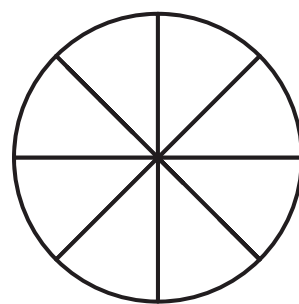
$$\frac{2}{4}$$




$$\frac{4}{6}$$




$$\frac{3}{8}$$




$$\frac{6}{6}$$



$$\frac{1}{3}$$

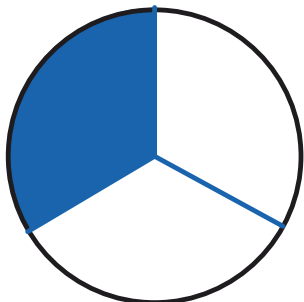


$$\frac{5}{8}$$




2. Partition and color these shapes to create the fractions below.


$$\frac{1}{3}$$



$$\frac{3}{4}$$



$$\frac{6}{8}$$



3. Think about this!

How do you know this fraction shows $\frac{5}{8}$?

