

Name: _____ Date: _____

Non-Unit Fractions

Complete the table by writing the name of each non-unit fraction. Then shade each shape to show the fraction for the row.




Fraction

Partitioned Shape

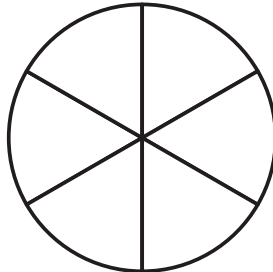
Written Fraction

$$\frac{7}{8}$$



seven eighths

—



three sixths

$$\frac{3}{4}$$




Fraction

Partitioned Shape

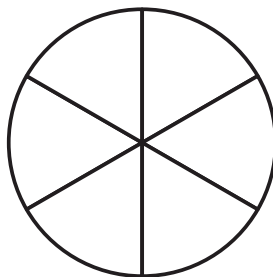
Written Fraction

—

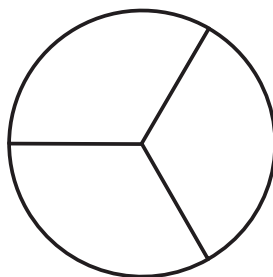


two halves
and/or
one whole

$\frac{4}{6}$



—



two thirds

