


Name: _____ Date: _____

Under the Sea

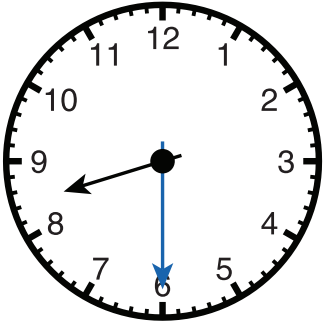
Look at the time given in the middle. Draw the minute hand on the analog clock. Then, write the time on the digital clock to match.




When you are done, look at the tour schedule and write the name of the tour that matches the time on the clocks.

Tour	Time
Shark Tour	3:20
Seal Tour	7:15
Turtle Tour	6:31
Penguin Tour	8:30
Grouper Tour	2:22
Sting Ray Tour	6:03

Example:




The time is half past eight.



Penguin Tour

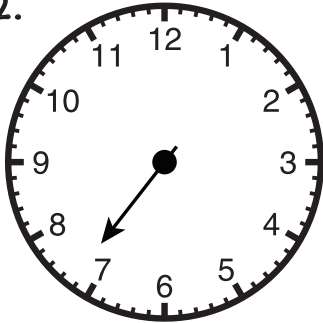
1.



The time is
six thirty-one.



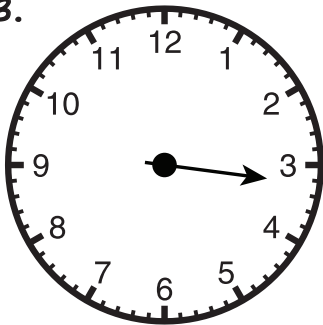
2.



The time is a
quarter past seven.



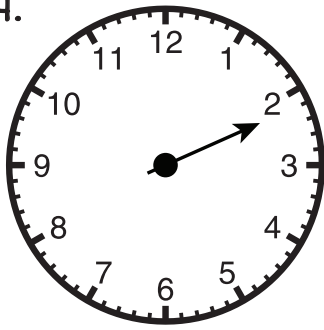
3.



The time is
three twenty.



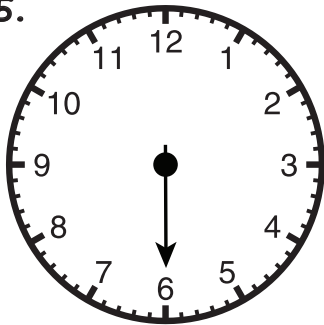
4.



The time is
two twenty-two.



5.



The time is
three minutes
past six.

