

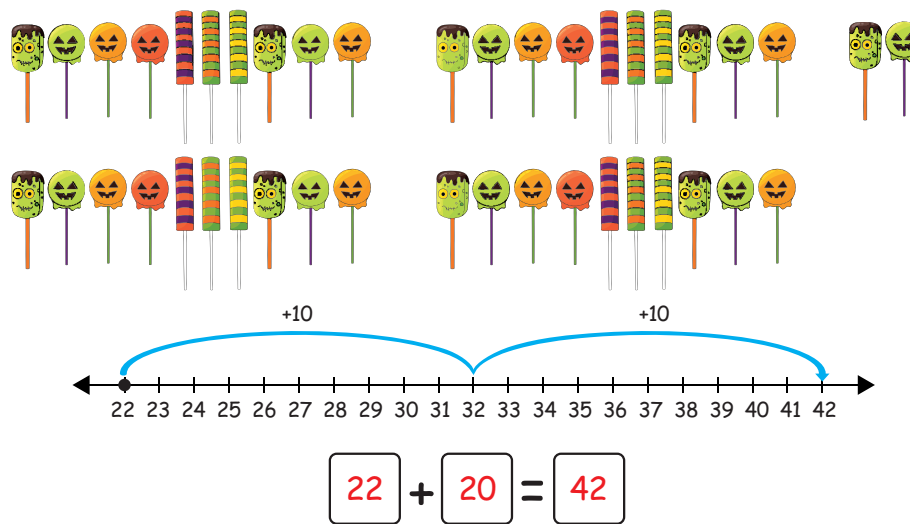
Name: \_\_\_\_\_ Date: \_\_\_\_\_

# Write Addition Sentences

Can you find the addends and sum? Use the pictures below to find the addends and sums. Then, write them on the lines to create addition sentences!



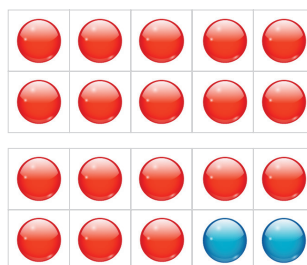
**Example:**



**1.**

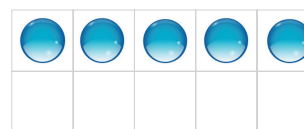


**Tens**



20

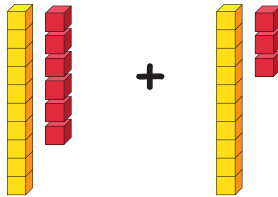
**Ones**



5

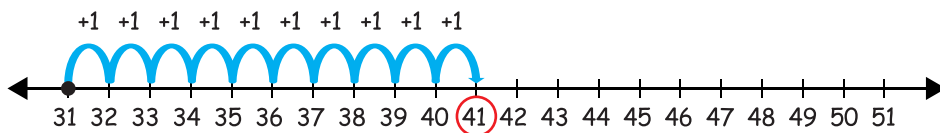
$$\square + \square = \square$$

2.



$$\square + \square = \square$$

3.




$$\square + \square = \square$$

4.

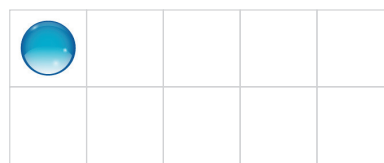


Tens



30

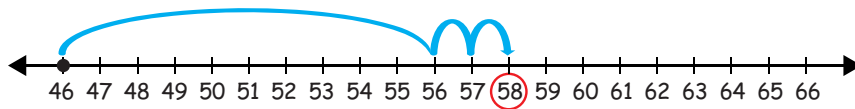
Ones



1

$$\square + \square = \square$$

5.



$$\square + \square = \square$$

**Example:**

**Write About It!**

Which strategy did you like the most? Draw and write to show the one you like. Write at least one sentence to say why you like the strategy.