



Name: _____ Date: _____

Problem Solving


Cut out the arrays. Read each problem. Glue the correct array in each box. Then use the array and the repeated addition sentence to find the answer! Write the answer to each problem on the line.



We have 6 rows with 2 blocks in each row. How many blocks do we have in all?

$$2 + 2 + 2 + 2 + 2 + 2 = ?$$

$$6 \times 2 = ?$$



We have 4 rows of 5 blocks. How many blocks do we have in total?

$$5 + 5 + 5 + 5 = ?$$

$$4 \times 5 = ?$$

