

Name: \_\_\_\_\_ Date: \_\_\_\_\_

# Add to Multiply

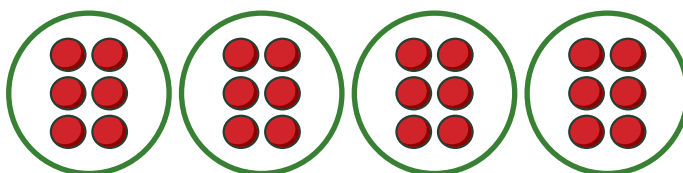
Use the repeated addition and multiplication sentences to help you draw a multiplication picture in the circles. Then, find the answer and write it on the line.



Example:


$$6 + 6 + 6 + 6 = ?$$

$$4 \times 6 = \underline{24}$$




$$1 + 1 + 1 + 1 + 1 + 1 + 1 = ?$$

$$7 \times 1 = \underline{\quad}$$




$$2 + 2 + 2 + 2 + 2 + 2 = ?$$

$$6 \times 2 = \underline{\quad}$$




$$3 + 3 + 3 + 3 + 3 = ?$$

$$5 \times 3 = \underline{\hspace{2cm}}$$



$$4 + 4 + 4 = ?$$

$$3 \times 4 = \underline{\hspace{2cm}}$$



$$5 + 5 + 5 + 5 + 5 = ?$$

$$5 \times 5 = \underline{\hspace{2cm}}$$

