


Name: _____ Date: _____

Adding Fractions

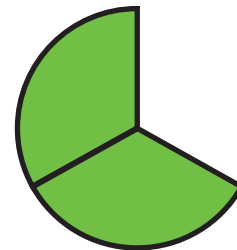

Match the parts to make whole shapes!



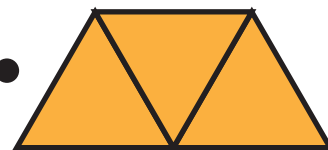

Example:





1.



2.




3.



Next page

Circle the part(s) that make the whole shape. Then draw the whole shape in the box.



4.



$$\frac{1}{2} + \frac{1}{2} = 1$$




5.



$$\frac{1}{3} + \frac{2}{3} = 1$$



6.



$$\frac{1}{4} + \frac{3}{4} = 1$$

