






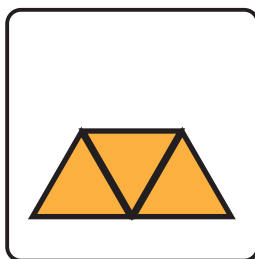

Name: _____ Date: _____

Adding Fractions

Can you find the parts to make whole shapes?
Cut out and glue the pictures in the right boxes.
Then draw the whole shapes in the box at the
end of each sentence.



$$\frac{1}{3} + \frac{2}{3} = 1$$



$$\frac{1}{4} + \frac{3}{4} = 1$$

