

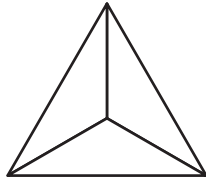
Name: \_\_\_\_\_ Date: \_\_\_\_\_

# Partition Shapes

Use crayons to color the shape to make the statement true.

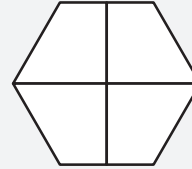


1.



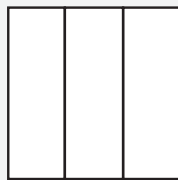
two thirds

2.



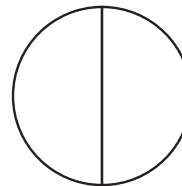
three fourths

3.



one third


4.



one half

Write the name of the colored part of the shape, for example, two fourths.

5.



\_\_\_\_\_

6.



\_\_\_\_\_



\_\_\_\_\_



\_\_\_\_\_