


Name: \_\_\_\_\_ Date: \_\_\_\_\_

# Differences Using a Number Line

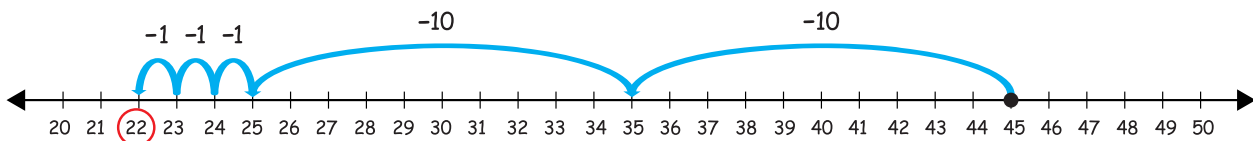
Can you find the differences using these number lines?



Example:

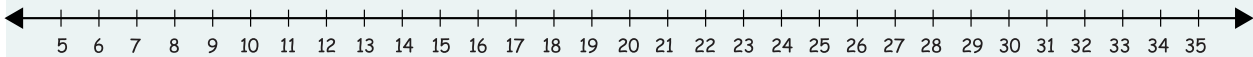
$$45 - 23 = 22$$

2 tens 3 ones



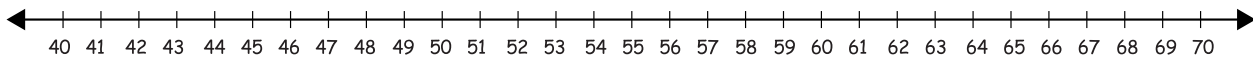
$$32 - 27 = \underline{\quad}$$

\_\_ tens \_\_ ones




$$66 - 13 = \underline{\quad}$$

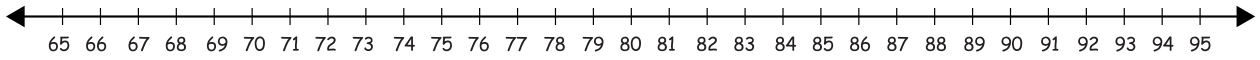
\_\_ tens \_\_ ones




Next page

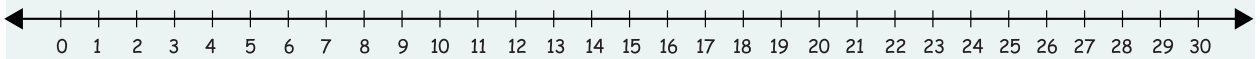
$$91 - 24 = \underline{\quad}$$


  
 \_\_\_ tens    \_\_\_ ones




$$29 - 11 = \underline{\quad}$$


  
 \_\_\_ tens    \_\_\_ ones

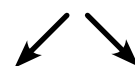


Which subtraction sentence matches each number line below?  
Write the letter next to each number line.


a.  $65 - 30 = 35$


  
 3 tens    0 ones

b.  $47 - 17 = 30$


  
 1 ten    7 ones

c.  $36 - 29 = 7$


  
 2 tens    9 ones

