

Name: _____ Date: _____



Estimate Using Centimeters and Meters

Circle the best measurement for each object.

1. Would you measure the height of this slide in centimeters or meters?



centimeters

meters

2. Would you measure the height of this puzzle piece in centimeters or meters?



centimeters

meters

3. Would you measure the length of this toy duck in centimeters or meters?



centimeters

meters

4. How tall is this bouncy house?




3 centimeters

5 meters

15 centimeters

5. How long is this diving board?

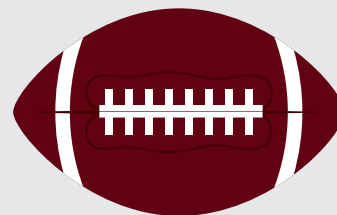


2 centimeters

6 meters

12 centimeters

6. How long is this football?



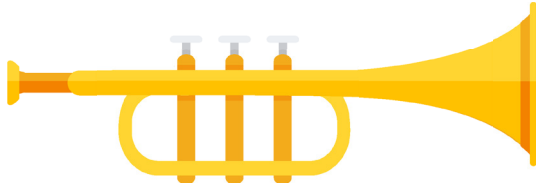
1 centimeters

4 meters

25 centimeters



Draw a line to match each toy with its estimated measurement.



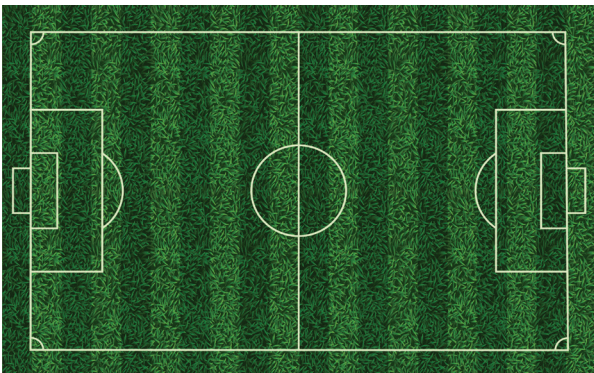
1 meter



105 meters



3 centimeters



70 centimeters