


Name: _____ Date: _____

Subtraction Word Problems

Solve each problem.




Use any subtraction strategy you have learned so far to complete these subtraction problems.

1. There are 7 turtles in the grass. 3 walked away. How many turtles are in the grass now?


I can draw a picture of the problem:

I can show the problem in a ten frame:



I can write a subtraction sentence for the problem: _____ - _____ = _____


My answer is: _____

Continue on next page. 

2. There are 8 cars in the parking lot. 4 drove away. How many cars are in the parking lot now?

I can draw a picture of the problem:

I can show the problem in a ten frame:



I can write a subtraction sentence for the problem: _____ - _____ = _____

My answer is: _____

Subtract.

3. $8 - 3 =$ _____

4. $7 - 3 =$ _____

5. $4 - 2 =$ _____

6. $8 - 4 =$ _____

7. $7 - 1 =$ _____

8. $9 - 6 =$ _____

9. $5 - 3 =$ _____

10. $4 - 3 =$ _____

11. $6 - 4 =$ _____

12. $3 - 2 =$ _____

13. $2 - 1 =$ _____

14. $6 - 3 =$ _____