



# I CAN SUBTRACT!





Cross out the correct number of objects and solve the problem.



$$3 - 1 = \underline{\quad}$$



$$5 - 4 = \underline{\quad}$$



$$4 - 3 = \underline{\quad}$$



$$6 - 4 = \underline{\quad}$$

---